



सीएसआईआर - राष्ट्रीय धातुकर्म प्रयोगशाला
CSIR - NATIONAL METALLURGICAL LABORATORY
बर्मानाईंस, जमशेदपुर, BURMAMINES, JAMSHEDPUR - 8310 007



No.2-NML(188)/2025-E.1

Date: 25.05.2026

NOTICE

It is in reference to the written exam held on 24.05.2026 for the post of Jr. Stenographer at CSIR-NML notified vide Advt. No. 07/2025. In this context, the Question booklet (**SET A to D**) and the Answer key thereto of the said exam are attached herewith for information of the candidates.

Representation, if any, on the questions and answer key thereto hereby invited from the candidates who appeared in the aforementioned written exam through e-mail to recruitment2025@admn.nml.in from their registered email ID (as mentioned in the application form), with the subject 'Representation-Written exam', on or before 01.06.2026 (by 05:00 PM). Any representation received after 01.06.2026 (05:00 PM) will not be entertained.

The candidate must write his name, roll no. and application no. in the representation.

Sd/-
Controller of Administration

Copy to: CSIR-NML website for information of the candidates

चुनना है जिसका संबंध उसी प्रकार का हो जैसा पहले दिए गए युग्मों के बीच है। सबसे उपयुक्त विकल्प चुनें।

For questions (6-10), there is a certain relationship between two given pairs on one side of (::), and another pair is given on the other side of (::). From the given alternatives, you must choose the pair that bears the same relationship as the pairs on the given side. Choose the best alternative.

6. AZ : ZA :: BY : ?

- a) YB
c) YV

- b) BX
d) BB

7. मोटर : काइल :: ? / Motor : Coil :: ?

- a) मेज़ : कुर्सी / Table : Chair
c) पहिया : कार / Wheel : Car

- b) रेजिमेंट : सैनिक / Regiment : Soldier
d) पहिया : बेयरिंग / Wheel : Bearing

8. EAGLE : FCJPJ :: CRAWL : ?

- a) DTDBR
c) DTDAQ

- b) DTFCR
d) DTEZQ

9. 4 : 19 :: 7 : ?

- a) 28
c) 68

- b) 52
d) 49

10. पंखा : पंख :: पहिया : ? / Fan : Wings :: Wheel : ?

- a) गाड़ियाँ / Cars
c) तीलियाँ / Spokes

- b) हवा / Air
d) गोल / Round

11. उस अक्षर-संयोजन का चयन कीजिए, जिसे दिए गए क्रम में रिक्त स्थानों पर क्रमवार रखने से वह क्रम तार्किक रूप से पूर्ण हो जाएगा।

Select the combination of letters that when sequentially placed in the blanks of the given series will logically complete the series.

A _ A _ C A B _ B _ A _ _ B C A B A _ C

- a) BABACBA
c) BBACABB

- b) BBABBCB
d) BBACBAB

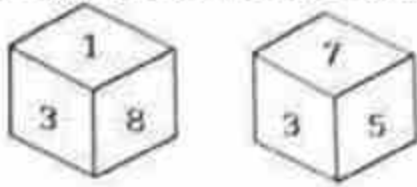
12. निम्नलिखित समीकरण में प्रश्नवाचक चिन्ह (?) के स्थान पर क्या आएगा, यदि '+' और '-' को परस्पर बदल दिया जाए तथा '×' और '÷' को परस्पर बदल दिया जाए?

What will come in the place of the question mark (?) in the following equation. If '+' and '-' are interchanged and '×' and '÷' are interchanged?

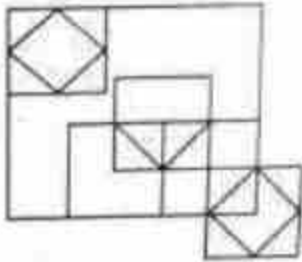
$$162 \times 9 - 452 + 7 \div 9 = ?$$

- a) 507
b) 407
c) 607
d) 707
13. छह संख्याएँ 1, 3, 5, 6, 7 और 8 पासे (dice) के विभिन्न फलकों पर लिखी गई हैं। इस पासे की दो स्थितियाँ चित्र में दिखाई गई हैं। उस फलक पर पर कौन-सी संख्या होगी जो 6 वाली संख्या के विपरीत है?

Six numbers 1, 3, 5, 6, 7 and 8 are written on different faces of a dice. Two positions of this dice are shown in the figure. Which is the number on the face opposite to the face containing 6?



- a) 8
b) 7
c) 5
d) 3
14. दिए गए चित्र में कितने त्रिभुज हैं? How many triangles are there in the given figure?



- a) 11
b) 15
c) 13
d) 14
15. 35 विद्यार्थी एक पंक्ति में बैठे हैं। करण बाएँ से 9वें स्थान पर है और अर्जुन दाएँ से 15वें स्थान पर है। करण और अर्जुन के बीच कितने विद्यार्थी हैं? 35 students are arranged in a row. Karan is 9th from left and Arjun is 15th from right. Find the number of students between Karan and Arjun.

- a) 10
b) 11
c) 12
d) 13

16. नवरात्रि के दौरान, प्रिया 30 दिए को एक पंक्ति में सजाती है। सोने का दिया बाएँ से 8वाँ है और चाँदी का दिया दाएँ से 10वाँ है। उनके बीच कितने दिए हैं?

During Navratri, Priya arranges 30 diyas in a row. A golden diya is 8th from the left, and a silver diya is 10th from the right. How many diyas are between them?

- a) 11
b) 15
c) 13
d) 12
17. कुछ अक्षर दिए गए हैं जिनके बाद प्रश्नवाचक चिन्ह (?) है। ये अक्षर एक विशेष क्रम क पालन कर रहे हैं। आपको सही विकल्प देना है जो प्रश्नवाचक चिन्ह के स्थान पर आ सके।
Few of the letters are given followed by a question mark (?) these letters are following a specific pattern you have to give the correct option which can replace question mark.

D, H, M, S, ?

- a) Z
b) A
c) B
d) C
18. उस अगले अगले अंक को बताइये जो प्रश्नवाचक चिन्ह (?) के स्थान पर तार्किक रूप से आएगा।

Find the next element that logically fits in place of the question mark (?)
24, 61, 122, 213, ?

- a) 341
b) 340
c) 330
d) 359
19. उस अगले अगले अंक को बताइये जो प्रश्नवाचक चिन्ह (?) के स्थान पर तार्किक रूप से आएगा।

Find the next element that logically fits in place of the question mark (?)
10, 24, 52, 108, ?

- a) 220
b) 226
c) 214
d) 233
20. यदि दी गई शीट को मोड़कर घन (cube) बनाया जाए, तो '≠' चिन्ह के विपरीत फलक पर कौन-सा चिन्ह होगा? What would be the symbol on the opposite side of '≠' if the given sheet is folded to form a cube?

%	μ
	∞
	¥
π	≠

29. निम्नलिखित में से कौन-सा अक्षर दिए गए क्रम में प्रश्नवाचक चिन्ह (?) के स्थान पर आएगा?
Which of the following letter will replace the question mark (?) in the given series?

L, N, P, R, T, V, ?

- a) X
c) V

- b) F
d) N

30. दिए गए दो संकेतन (\times और \div) को परस्पर बदलने के बाद, दिए गए समीकरण का मान क्या होगा? After interchanging the given two signs, what will be the value of the given equation?


\times and \div

$$47 + 13 \div 65 \times 5 - 16$$

- a) 195
c) 205

- b) 190
d) 200

31. दिए गए चित्र में कितने चतुर्भुज (quadrilaterals) हैं? How many quadrilaterals are there in the given figure?



- a) 22
c) 24

- b) 26
d) 23

32. S, T की बहन है। R, S का भाई है। U, W की पत्नी है। T, U का पिता है। तो T का W से क्या संबंध है? S is the sister of T. R is the brother of S. U is the wife of W. T is the father of U. How is T related to W?

- a) ससुर/ Father-in-law
c) पिता / Father

- b) पुत्र/ Son
d) मामा / Maternal Uncle

33. निम्नलिखित प्रश्न में, दिए गए विकल्पों में से असंगत अक्षर/अक्षरों का चयन कीजिए। In the following question, select the odd letter/ letters from the given alternatives.

- a) LMNO
c) ABCD

- b) IJKL
d) BDEF

34. प्रश्नवाचक चिन्ह (?) का मान पता कीजिये।

Find the value of the question mark (?)



- a) 104
c) 180

- b) 200
d) 125

35. प्रश्नवाचक चिन्ह (?) का मान पता कीजिये | Find the value of the question mark (?)

7	8	11
9	5	9
11	3	6
8	6	?

- a) 12
c) 16

- b) 14
d) 20

36. प्रश्नवाचक चिन्ह (?) का मान पता कीजिये | Find the value of the question mark (?)

8	7	11
64	49	121
48	35	?

- a) 144
c) 50

- b) 99
d) 89

37. P, Q, R और S कैरम खेल रहे हैं। P, R और S, Q साथी हैं। R पश्चिम की ओर देख रहा है और S, R के दाहिने ओर बैठा है। तो Q किस दिशा में देख रहा है?

P, Q, R and S are playing carrom. P, R and S, Q are partners, S is sitting to the right of R who faces west, then Q faces which direction?

- a) दक्षिण / South
c) पश्चिम / West

- b) पूर्व / East
d) उत्तर / North

38. पाँच लड़कियाँ E, F, G, H और I एक पंक्ति में उत्तर दिशा की ओर मुख करके खड़ी हैं। H, G के दाहिने ओर है। I, G के बाएँ ओर है, लेकिन F के दाहिने ओर है। H, E के बाएँ ओर है। तो सबसे दाहिने छोर पर कौन खड़ी है?

Five girls E, F, G, H and I are standing in a row facing north. H is on the right of G. I is on the left of G, but is on the right of F. H is on the left of E. Who is standing on the extreme right?

- a) E
b) F
c) G
d) H

39. पाँच मित्र Rajan, Roshan, Rupesh, Ranjit और Randhir एक पंक्ति में उत्तर दिशा की ओर मुख करके खड़े हैं। Randhir, Rajan के बाएँ ओर है और Roshan, Rupesh के दाहिने ओर है। यदि Roshan, Ranjit और Rupesh के बीच में है, तो Ranjit के बाएँ ओर कौन है?

Five friends Rajan, Roshan, Rupesh, Ranjit and Randhir are standing in a line facing north. Randhir is to the left of Rajan and Roshan is to the right of Rupesh. If Roshan is between Ranjit and Rupesh, who is to the left of Ranjit?

- a) राजन / Rajan
b) रूपेश / Rupesh
c) रोशन / Roshan
d) रंधीर / Randhir

40. पाँच गाँव हैं – P, Q, R, S और T। गाँव Q, P के पूर्व में और गाँव S के दक्षिण में है। गाँव R, गाँव T के पश्चिम में है, जो P के उत्तर में है। तो गाँव S, P के सापेक्ष किस दिशा में है?

There are five villages, namely P, Q, R, S and T. Village Q is to the east of P and to the south of village S. Village R is to the west of village T, which is to the north of village P. In which direction is village S with respect to village P?

- a) दक्षिण-पश्चिम / South- west
b) उत्तर-पश्चिम / North- west
c) उत्तर / North
d) उत्तर-पूर्व / North-east

41. 'K' ने 5 मीटर उत्तर दिशा में चला। फिर वह बाएँ मुड़ा और 10 मीटर चला। उसके बाद वह दाएँ मुड़ा और 20 मीटर चला। फिर वह फिर से दाएँ मुड़ा और 10 मीटर चला। तो वह प्रारंभिक बिंदु से कितनी दूरी पर है?

'K' walked 5 metres towards North, then he took a left turn and walked for 10 metres. He then took a right turn and walked for 20 metres, and again took right turn and walked 10 metres. How far he is from the starting point?

- a) 20 मीटर metres
b) 15 मीटर metres
c) 25 मीटर metres
d) 30 मीटर metres

42. कला का घर, माला के घर के ठीक सामने है। कला उत्तर-पूर्व दिशा में जाकर माला के घर पहुँचती है। यदि माला को कला के घर जाना हो, तो उसे किस दिशा में जाना चाहिए?

Kala's house is just opposite to Mala's house. Kala goes towards North-East and reaches Mala's house. If Mala has to go to Kala's house then in which direction should Mala go?

- a) दक्षिण-पश्चिम/ South-West b) उत्तर-पश्चिम/ North-West
c) उत्तर-पूर्व/ North-East d) दक्षिण-पूर्व/ South-East

43. लता पश्चिम दिशा में 20 मीटर चलती है और फिर बाएँ मुड़कर 10 मीटर चलती है। अब हर बार दाएँ मुड़ते हुए वह क्रमशः 10 मीटर, 20 मीटर और 30 मीटर चलती है। तो वह अपने प्रारंभिक बिंदु से कितनी दूरी पर है?

Latha walks 20m in west and then 10 m to the left. Now every Time turning to her right, she walks 10 m, 20 m and 30 m respectively. How far is she now from her starting point?

- a) 30 मीटर m b) 10 मीटर m
c) 20 मीटर m d) 40 मीटर m

44. M, K का भाई है। P, K की बहन है। R, P का पिता है। K और R का क्या सम्बन्ध है है?

M is brother of K. P is sister of K. R is father of P. How is K related to R?

- a) पुत्र/ Son b) पुत्री/ Daughter
c) पुत्र या पुत्री/ Son or Daughter d) डेटा अपर्याप्त/ Data inadequate

45. A, B का भाई है। C, A की बहन है। D, L का भाई है। L, B की बेटी है। तो D का चाचा कौन है?

A is the brother of B. C is the Sister of A. D is the brother of L. L is the daughter of B, then who is the uncle of D?

- a) B b) C
c) A d) डेटा अपर्याप्त है Data inadequate

46. आज शुक्रवार है। 62 दिनों बाद कौन-सा दिन होगा?

Today is Friday. After 62 days, it will be

- a) शनिवार/ Saturday b) सोमवार/ Monday
c) मंगलवार/ Tuesday d) गुरुवार/ Thursday

47. किसी शताब्दी का अंतिम दिन कभी नहीं हो सकता है

The last day of a century cannot be

- a) सोमवार/ Monday b) बुधवार/ Wednesday
c) शुक्रवार/ Friday d) मंगलवार/ Tuesday

48. भारत का पहला गणतंत्र दिवस 26 जनवरी 1950 को मनाया गया था। यह था—

The first Republic Day of India was celebrated on 26th January, 1950. It was

- a) मंगलवार/ Tuesday b) बुधवार/ Wednesday
c) गुरुवार/ Thursday d) शुक्रवार/ Friday

49. घड़ी में समय 4:30 है। यदि मिनट की सुई दक्षिण दिशा की ओर इशारा कर रही है, तो घंटे की सुई किस दिशा की ओर इशारा करेगी?

The time on the watch is 4:30. If the minute hand points towards south, the hour hand will point towards?

- a) दक्षिण-पूर्व / South-East b) पश्चिम / West
c) उत्तर-पश्चिम/ North West d) पूर्व / East

50. घड़ी की घंटे की सुई 10 मिनट में कितने अंश (डिग्री) घूमती है?

How many degrees does an hour-hand move in 10 minutes?

- a) 10° b) 20°
c) 5° d) 15°

General Awareness

51. भारत में 'राष्ट्रीय विज्ञान दिवस' 28 फरवरी को मनाया जाता है। यह किस वैज्ञानिक की उपलब्धि को चिह्नित करता है?

In India, 'National Science Day' is celebrated on February 28 to mark the achievement of which scientist?

- a) सी. वी. रमन/ C. V. Raman b) होमी जे. भाभा/ Homi J. Bhabha
c) विक्रम साराभाई/ Vikram d) ए. पी. जे. अब्दुल कलाम/ A. P. J.
Sarabhai Abdul Kalam

52. निम्नलिखित में से कौन भारतीय अंतरिक्ष अनुसंधान संगठन (ISRO) के पहले अध्यक्ष थे?

Who among the following was the first chairman of the Indian Space Research Organisation?

- a) विक्रम साराभाई/ Vikram b) एम. जी. के. मेनन/ M.G. K.
Sarabhai Menon
c) सतीश धवन/ Satish Dhawan d) होमी जे. भाभा/ Homi J. Bhabha

53. Gemini AI मॉडल किस कंपनी द्वारा विकसित किया गया था?

..... is/ are the hardest tissue(s) in the human body.

- a) एपिडर्मिस/ Epidermis b) उपास्थि/ Cartilage
c) अस्थि पेशियाँ/ Skeletal Muscles d) दाँत का इनेमल/ Tooth Enamel

68. न्यूट्रॉन की खोज किसने की थी?

Who among the following discovered the neutrons?

- a) जे. चैडविक/ J. Chadwick b) ई. गोल्डस्टीन/ E. Goldstein
c) नील्स बोहर/ Neil Bohr d) अर्नेस्ट रदरफोर्ड/ Ernest Rutherford

69. महात्मा गांधी ने किसानों के समर्थन में गुजरात के खेड़ा ज़िले में सत्याग्रह किस वर्ष आयोजित किया था?

In which year Mahatma Gandhi organised a satyagraha in the Kheda district of Gujarat in the support of peasants?

- a) 1916 b) 1920
c) 1919 d) 1918

70. मिज़ोरम की राजधानी क्या है? What is the capital of Mizoram?

- a) कोहिमा / Kohima b) शिलांग / Shillong
c) आइज़ोल / Aizawl d) इम्फाल / Imphal

71. अशोक के सभी स्तंभ लेखों में सबसे लंबा कौन-सा है?

Among all the pillar edicts of Ashoka, which one is the longest one?

- a) 7वाँ स्तंभ लेख / 7th pillar edict b) 6वाँ स्तंभ लेख / 6th pillar edict
c) 5वाँ स्तंभ लेख / 5th pillar edict d) 3वाँ स्तंभ लेख / 3th pillar edict

72. निम्नलिखित में से कौन-सा पारंपरिक ऊर्जा स्रोत है? Which of these is a conventional source of energy?

- a) भू-तापीय / Geothermal b) कोयला / Coal
c) सौर / Solar d) पवन / Wind

73. निम्नलिखित में से कौन-सा अखाद्य तिलहन है? / Which of these is a non-edible oilseed?

- a) तिल / Sesame b) सूरजमुखी / Sunflower
c) अलसी / Linseed d) मूँगफली / Groundnut

74. 2026-27 के केंद्रीय बजट में कृषि-स्टैक पोर्टलों को एकीकृत करने के लिए प्रस्तावित बहुभाषी कृत्रिम बुद्धिमत्ता (AI) उपकरण का नाम क्या है?

What is the name of the multilingual Artificial Intelligence (AI) tool proposed in Union Budget 2026-27 to integrate AgriStack portals?

- a) एग्री-एआई प्लेटफॉर्म / Agri-AI Platform
 b) भारत-कृषि / Bharat-KRISHI
 c) फ़ार्मएआई / FarmAI
 d) भारत-विस्तार / Bharat-VISTAAR

75. भारत में अलग 'वरिष्ठ नागरिक बजट' घोषित करने वाला पहला राज्य कौन-सा है?

Which state has become the first in India to announce a separate 'Elderly Budget'?

- a) केरल / Kerala
 b) महाराष्ट्र / Maharashtra
 c) तमिलनाडु / Tamil Nadu
 d) ओडिशा / Odisha

76. अग्नि-III मध्यम दूरी की बैलिस्टिक मिसाइल किस संगठन द्वारा विकसित की गई है?

Agni-III intermediate-range ballistic missile is developed by which organization?

- a) भारतीय अंतरिक्ष अनुसंधान संगठन / Indian Space Research Organisation
 b) भारत डायनेमिक्स लिमिटेड / Bharat Dynamics Limited
 c) हिंदुस्तान एयरोनॉटिक्स लिमिटेड / Hindustan Aeronautics Limited
 d) रक्षा अनुसंधान एवं विकास संगठन / Defence Research and Development Organisation

77. दलमा वन्यजीव अभयारण्य किस राज्य में स्थित है? / Dalma Wildlife Sanctuary is located in which state?

- a) झारखंड / Jharkhand
 b) गुजरात / Gujarat
 c) राजस्थान / Rajasthan
 d) ओडिशा / Odisha

78. भारत का पहला राष्ट्रीय 'गौ संस्कृति संग्रहालय' उत्तर प्रदेश के किस शहर में स्थापित किया गया है?

India's first National Cow Culture Museum has been established in which city of Uttar Pradesh?

- a) वाराणसी / Varanasi
 b) मथुरा / Mathura
 c) गोरखपुर / Gorakhpur
 d) अयोध्या / Ayodhya

- a) न्यूयॉर्क / New York
 c) लंदन / London
- b) वियना / Vienna
 d) जेनेवा / Geneva

85. झारखंड राष्ट्रीय आंदोलन में प्रसिद्ध भाई कौन थे? / Who were the famous brothers in the Jharkhand National Movement?

- a) सुरजू भगत और लालू भगत /
Surju Bhagat and Lalu
Bhagat
- b) तिलका मांझी और बिरसा मुंडा /
Tilka Manjhi and Birsa
Munda
- c) सिद्धू मुर्मू और कान्हू मुर्मू /
Siddhu Murmu and Kanhu
Murmu
- d) जात्रा उराँव और राम मांझी / Jatra
Oraon and Ram Manjhi

86. झारखंड में छठ पूजा किस देवता की आराधना के लिए की जाती है? / Chhath Puja in Jharkhand is dedicated to worship which deity?

- a) चंद्रमा / Moon
 c) सूर्य / Sun
- b) नदी देवता / River deity
 d) वन देवता / Forest deity

87. निम्नलिखित में से कौन-सी रबी फ़सलें हैं? / Which of the following are Rabi crops?

- a) ज्वार और बाजरा / Jowar and
Bajra
- b) सरसों और रेपसीड / Rapeseed
and Mustard
- c) खरबूजा और लौकी /
Muskmelon and Gourd
- d) मक्का और गन्ना / Maize and
Sugarcane

88. भारत के निम्नलिखित केंद्र शासित प्रदेशों में से किसका क्षेत्रफल सबसे बड़ा है? / Which among the following Union Territory of India has the largest area?

- a) दिल्ली / Delhi
- b) अंडमान और निकोबार द्वीपसमूह
/ Andaman & Nicobar
Islands
- c) दादरा और नगर हवेली / Dadra
& Nagar Haveli
- d) लद्दाख / Ladakh

89. राम का पुल या रामसेतु निम्नलिखित में से किस जलसंधि में स्थित है? / Rama's Bridge or Rama Setu is located in which among the following straits?

- a) बेरिंग जलसंधि / Bering Strait
- b) पाल्क जलसंधि / Palk Strait
- c) कुक जलसंधि / Cook Strait
- d) तेबराउ जलसंधि / Strait of
Tebräu

90. भारत की सबसे पुरानी पर्वत श्रृंखला कौन-सी है? / Which of the following is the oldest mountain range in India?

- a) हिमालय / Himalayas
 c) विंध्य / Vindhya
- b) नीलगिरि / Nilgiri
 d) अरावली / Aravalli

91. निम्नलिखित में से किस प्रकार की मिट्टी को सामान्यतः 'सेल्फ मलचिंग साइल' कहा जात है? / Which of the following type of soils is commonly known as 'self-mulching soil'?

- a) काली मिट्टी / Black soil
 c) लाल मिट्टी / Red soil
- b) भूरी मिट्टी / Brown soil
 d) धूसर मिट्टी / Grey soil

92. भारत का सबसे बड़ा तेल क्षेत्र (Oilfield) निम्नलिखित में से कौन-सा है? / Which of the following is the largest oil field in India?

- a) बॉम्बे हाई ऑयलफील्ड /
Bombay High Oilfield
- b) अंकलेश्वर ऑयलफील्ड /
Ankleswar Oilfield
- c) नाहरकटिया ऑयलफील्ड /
Naharkatia Oilfield
- d) डिगबोई ऑयलफील्ड / Digboi
Oilfield

93. नरोरा परमाणु ऊर्जा स्टेशन भारत के किस स्थान पर स्थित है? / Narora Atomic Power Station is situated in which of the following places of India?

- a) गुजरात / Gujarat
 c) कर्नाटक / Karnataka
- b) उत्तर प्रदेश / Uttar Pradesh
 d) महाराष्ट्र / Maharashtra

94. भारत में अनेक कोयला क्षेत्र किस घाटी में पाए जाते हैं? / In India, there are many coal fields found in ...

- a) गंगा घाटी / Ganga Valley
 c) कृष्णा घाटी / Krishna Valley
- b) कावेरी घाटी / Kaveri Valley
 d) दामोदर घाटी / Damodar Valley

95. भारत का सबसे ऊँचा पर्वत शिखर कौन-सा है? / The highest peak in India is ____

- a) कामेत / Kamet
 c) नंदा देवी / Nanda Devi
- b) नंदाकोट / Nandakot
 d) के२ (गॉडविन ऑस्टिन) / K2
(Godwin Austen)

96. 2011 क्रिकेट विश्व कप, जिसमें भारत ने अपना दूसरा विश्व कप खिताब जीता, में 'प्लेयर ऑफ द सीरीज़' कौन थे? / Who was the "player of the series" in the 2011 Cricket World Cup, in which India won its second world cup champion title?

- a) तिलकरत्ने दिलशान /
Tillakaratne Dilshan
- b) सचिन तेंदुलकर / Sachin
Tendulkar

- c) कुमार संगकारा / Kumar Sangakkara
d) युवराज सिंह / Yuvraj Singh

97. निम्नलिखित में से कौन-सा सूक्ष्मजीव पोलियो और चिकनपॉक्स जैसी बीमारियाँ उत्पन्न करता है? / Which of the following micro-organism causes diseases like polio and chicken pox?

- a) प्रोटोज़ोआ / Protozoa
b) बैक्टीरिया / Bacteria
c) विषाणु / Virus
d) शैवाल / Algae

98. दालें किस कुल (Family) से प्राप्त होती हैं? / Pulses are obtained from the family of ___

- a) लिलीएसी / Liliaceae
b) फ़ुंगी / Fungi
c) साइकाडेसी / Cycadaceae
d) लेग्यूमिनोसी / Leguminosae

99. स्वराज पार्टी निम्नलिखित में से किस घटना का परिणाम थी? / Swaraj party was outcome of which among the following incidents?

- a) चौरी चौरा / Chauri Chaura
b) भारत छोड़ो आंदोलन / Quit India Movement
c) साइमन कमीशन का आगमन / Arrival of Simon Commission
d) बारडोली सत्याग्रह / Bardoli Satyagraha

100. भारतीय पुनर्जागरण के जनक किसे कहा जाता है? / Who is known as the 'Father of Indian Renaissance'?

- a) विक्रम साराभाई / Vikram Sara Bhai
b) राजा राम मोहन राय / Raja Ram Mohan Roy
c) राम गोपाल वर्मा / Ram Gopal Verma
d) लाला लाजपत राय / Lala Lajpat Rai

English Language and comprehension:

For the following Questions (101-105), some part of the sentence may have errors. Find out which part of the sentence has an error and select the appropriate option. If a sentence is free from error, select 'No Error'.

101. My elder sister (A)/ is much smarter (B)/ than me. (C)/ No error (D)

- a) (A)
b) (B)
c) (C)
d) (D)

102. How long (A)/ have you been (B)/ learning English for? (C)/ No error (D)

c) more fast

d) fast

In each of the following questions (111-120), out of the four alternatives, choose the one which best expresses the **meaning** to the given word:

111. Crooked

a) Twisted

b) Straight

c) Offspring

d) Harmonious

112. Genre

a) Celebrity

b) Common man

c) Category

d) Pleasant

113. Development

a) Enrich

b) Evolution

c) Amplify

d) Promotion

114. Gluttony

a) Greed

b) Giant

c) Enormous

d) Stomach

115. Revamp

a) Retreat

b) Repeat

c) Restructure

d) Retrial

116. Recollect

a) Return

b) Remember

c) Unite

d) Assemble

117. Grave

a) Dead

b) Still

c) Serious

d) Sad

118. Advance

a) Bend

b) Give

c) Change

d) Move forward

119. Subsidy

a) Endowment

b) Forfeit

c) Mulct

d) Reward

120. Exactly
- a) Different
 - b) Precisely
 - c) Similar
 - d) Same

In each of the following questions (121-130), out of the four alternatives, choose the one which best expresses the **antonym/ opposite in meaning** to the given word:

121. Dilate
- a) Terminate
 - b) Compress
 - c) Expand
 - d) Weaken
122. Mysterious
- a) Complicated
 - b) Bright
 - c) Evident
 - d) Puzzle
123. Creation
- a) Death
 - b) Destruction
 - c) Formation
 - d) Sublimation
124. Expect
- a) Regret
 - b) Loathe
 - c) Despair
 - d) Attend
125. Secret
- a) Covert
 - b) Overt
 - c) Unseen
 - d) Sociable
126. Dearth
- a) Poverty
 - b) Foreign
 - c) Lack
 - d) Abundance
127. Famous
- a) Obscure
 - b) Boring
 - c) Poor
 - d) Untalented
128. Supercilious
- a) Humble
 - b) Unimportant
 - c) Relevant
 - d) Serious

129. Conceal
- | | |
|-------------|------------|
| a) Announce | b) Declare |
| c) State | d) Reveal |

130. Amusement
- | | |
|---------------|-------------|
| a) Mischief | b) Naughty |
| c) Melancholy | d) Hilarity |

In each of the following questions (131-135), out of the four alternatives, choose the word with the correct spelling.

131. Choose the word with the correct spelling
- | | |
|--------------|--------------|
| a) Oxidieser | b) Thespian |
| c) Aproval | d) Secreetes |

132. Choose the word with the correct spelling
- | | |
|-------------|--------------|
| a) Litigate | b) Diatrybe |
| c) Cloystre | d) Griemiest |

133. Choose the word with the correct spelling
- | | |
|------------|-------------|
| a) Humable | b) Customer |
| c) Breches | d) Boufant |

134. Choose the word with the correct spelling
- | | |
|-------------|--------------|
| a) Mariaage | b) Marryiage |
| c) MARRAGE | d) Marriage |

135. Choose the word with the correct spelling
- | | |
|----------------|----------------|
| a) Innumerable | b) Innumarable |
| c) Innumereble | d) Innumerable |

In each of the following questions (136-140), out of the four alternatives, choose the word which is spelt wrongly.

136. Choose the word which is spelt wrongly.
- | | |
|----------------|------------|
| a) Conceit | b) Dungaon |
| c) Dismissible | d) Distil |

137. Choose the word which is spelt wrongly.
- | | |
|------------|------------|
| a) Beginer | b) Besiege |
|------------|------------|

145. Get into a soup
a) To make things difficult
b) To be worrisome
c) To be familiar of
d) To get an advantage
146. High and Low
a) Everywhere
b) Optimism
c) Hypocrisy
d) Experience
147. Ended in a fiasco
a) A complete failure
b) A successful event
c) Changed one completely
d) Twisted around
148. To judge a book by its cover
a) To rely on outward appearance
b) To buy books after seeing the colourful cover
c) To read the outer cover only
d) To go with popular opinions
149. Rome was not built in a day
a) It takes time to create great things
b) You have to win many wars to build an empire
c) A task done hurriedly fails completely
d) Building anything worth while requires skill
150. Pandora's box
a) Arguments for and against
b) To act dubiously
c) Popular
d) A prolific source of trouble

In each of the following questions (151-160), out of the four alternatives, choose the one which can substitute in the given word(s)/sentence.

151. Capable of being read clearly
a) Illegible
b) Legitimate
c) Legible
d) Readings
152. Something chosen as a symbol to bring good luck
a) Charm
b) Mascot
c) Luck toy
d) Totem
153. The first model of a new device.

- a) count him on
- b) count on he
- c) count at him
- d) No improvement

163. There are **schools in either sides** of the road.

- a) schools on either side
- b) school on either side
- c) school on either sides
- d) No improvement

164. We **acted your** instructions

- a) acted upon your
- b) acted your very
- c) acted over your
- d) No improvement

165. Sapnaa has just **gone to** her family in Mumbai.

- a) visited
- b) found
- c) joined
- d) No improvement

In each of the following questions (166-168), a sentence has been given in Active/Passive voice. Out of four alternatives suggested, select the one which best expresses the same sentence in Passive/Active voice.

166. I had to stop all my work to complete this project.

- a) All other work has to be stopped to complete this project by me
- b) For completing this project all other work must be stopped
- c) For completing this project I had to stop all my work
- d) To complete this project all other work had been stopped by me

167. Who teaches you English?

- a) By whom were you taught English?
- b) By whom are you taught English?
- c) English is taught by whom?
- d) By whom will you be taught English?

168. We hope that we shall win the match.

- a) The match is hoped to be won.
- b) Match winning is our hope.
- c) It is hoped that the match will be won by us.
- d) Winning the match is hoped by us.

In each of the following questions (169-170), a sentence has been given in Direct/Indirect speech. Out of four alternatives suggested, select the one, which best expresses the same sentence in Direct/Indirect speech.

169. "What did you say", she said.

- | | |
|----------------------------|---------------------------------|
| a) She said what I said | b) She asked me what I had said |
| c) She told me what I said | d) She spoke about what I said |

170. She asked me not to go to Chennai

- | | |
|--|---|
| a) She told me, "Don't go to Chennai" | b) She is telling me, "Don't go to Chennai" |
| c) She was telling me, "Don't go to Chennai" | d) She told me, "Go to Chennai" |

In each of the following questions (171-175), rearrange the parts of the sentence in correct order

171. Aggregate levels of under nutrition in India

- P. remain shockingly high; despite the impressive
- Q. stunting in the last decade
- R. reduction in

- | | |
|--------|--------|
| a) PRQ | b) QPR |
| c) RPQ | d) QRP |

172. Ironically, in spite of a decline in poverty,

- P. the proportion of
- Q. the population receiving welfare
- R. benefits has risen sharply

- | | |
|--------|--------|
| a) QRP | b) PQR |
| c) RPQ | d) QPR |

173. There was a second part

- P. are ambivalent about
- Q. many people
- R. of her decision which

- | | |
|--------|--------|
| a) QRP | b) QPR |
| c) PRQ | d) RQP |

174. This alone
 P. should alert us to what
 Q. is actually about
 R. the demand for a Uniform Civil Code
- | | |
|--------|--------|
| a) PRQ | b) PQR |
| c) QPR | d) RPQ |
175. It is not uncommon
 P. to push for public expenditure
 Q. at a time
 R. when private investment sentiment is weak
- | | |
|--------|--------|
| a) QRP | b) PQR |
| c) RPQ | d) QPR |

Directions (176-180): In the following passage, some of the words have been left out. Read the passage carefully and select the correct answer for the given numbered blank out of the four alternatives.

The battle between attackers and the attacked is becoming still more **(176)**. Faced with potentially new cyber **(177)**, the danger to India's economic and national security is going **(178)** geometrical progression. To be forearmed, with **(179)** offensive cyber operations and **(180)** cyber security, is essential.

- | | | |
|------|---------------|---------------|
| 176. | a) stronger | b) asymmetric |
| | c) inclined | d) strange |
| 177. | a) onslaughts | b) attack |
| | c) world | d) intrusions |
| 178. | a) down as | b) down for |
| | c) up on | d) up in |
| 179. | a) the two | b) both |
| | c) either | d) neither |

people are now concerned about it. This may at first seem strange because one of the most gratifying developments of the last few years has been the passing of strict laws to protect wild animals and the consequent decline in the hunting of big-game for sport. Why is it, then that some rare wild animals are still threatened with extinction and even some of the less ones are rapidly declining in number?

One reason is the 'march of civilization'. When an area is wholly cleared of vegetation to make room for new towns, factory sites or hydroelectric plant the natural home of several species is destroyed. The displaced animal must either migrate to another area or perish. Even the clearing of land for a road or an airfield may involve 'pushing back' the jungle and the smaller the area in which wild animals compete for a living, the smaller the number that can hope to survive.

186. According to the author what is referred to 'this may at first seem strange'?
- | | |
|---|------------------------------|
| a) The problem of saving certain wild animals | b) The hunting of big-game |
| c) The clearing vegetation | d) The extinction of animals |
187. What is meant by 'pushing back the jungle'?
- | | |
|---|----------------------------|
| a) To move jungle away | b) To compete for a living |
| c) Clearing of vegetation to make towns and factory sites | d) Removing the jungle |
188. What has the passing of strict laws resulted in?
- | | |
|--------------------------------|--|
| a) A problem for zoologists | b) The decline of big-game hunting for sport |
| c) Smaller locations for towns | d) Wiping out wild animals in smaller number |
189. What is the main reason for an area to be wholly cleared?
- | | |
|------------------------------|-------------------------------------|
| a) The march of civilization | b) To make rooms for rare animals |
| c) To grow trees | d) To reduce the area of the jungle |

190. The meaning of the word 'gratifying' is
- | | |
|--------------|--------------|
| a) resulting | b) reducing |
| c) pleasing | d) declining |

Directions (191-195): Read the following passage carefully and choose the most appropriate answer to each question out of the four alternatives.

Today perhaps your only association with the word 'polio' is the Sabin Oral Vaccine that protects children from the disease, sixty-five years' ago, this was not so. The dreaded disease, which mainly affects the brain and the spinal cord, causes stiffening and weakening of the muscles, crippling and paralysis- which is why I am in a wheel-chair today. If somebody had predicted, when I was born, that this would happen to me, no one would have believed it. I was the seventh child in a family of four pairs of brothers and sister, with a huge 23- year gap between the first and the last. I was told that, unlike the others, I was so fair and brown-haired that I looked more like a foreigner than a Dawood Bohri. I was also considered to the healthiest of the brood.

191. In this passage, the word "brood" refers to
- | | |
|---------------------------|---------------------|
| a) Polio victims | b) Foreign children |
| c) Children in the family | d) Indian children |
192. In his childhood, the narrator looked "more like a foreigner than a Dawood Bohri". This was because he was
- | | |
|--------------------|--------------------------|
| a) A foreign child | b) A very healthy boy |
| c) Tall and smart | d) Fair and brown-haired |
193. In his childhood, the narrator was
- | | |
|------------------|--------------------|
| a) A weakling | b) Very healthy |
| c) Tall and slim | d) Short and stout |
194. The narrator was the seventh child in a family of
- | | |
|----------------|----------------|
| a) 8 children | b) 16 children |
| c) 10 children | d) 4 children |
195. In this passage, the narrator is a patient of
- | | |
|------------------|---------------------|
| a) Heart disease | b) Polio |
| c) Paralysis | d) Nervous weakness |

Use For Rough Work

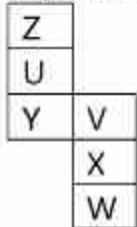
Use For Rough Work

Use For Rough Work

General Intelligence & Reasoning

1. यदि दी गई शीट को मोड़कर घन (cube) बनाया जाए, तो 'Y' अक्षर के विपरीत फलक पर कौन-सा अक्षर होगा?

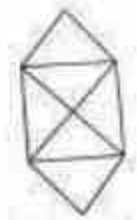
What would be the letter on the opposite side of 'Y' if the given sheet is folded to form a cube?



- a) W
b) Z
c) X
d) V
2. दिए गए क्रम में प्रश्नवाचक चिन्ह (?) के स्थान पर क्या आना चाहिए?
What should come in place of the question mark (?) in the given series?

40, ?, 18, 10, 4, 0

- a) 30
b) 28
c) 25
d) 22
3. दिए गए चित्र में कुल कितने त्रिभुज हैं? /What is the total number of triangles in the given figure?



- a) 6
b) 8
c) 10
d) 12
4. किन दो संकेतन (चिन्हों) को परस्पर बदलने पर यह समीकरण सही होगा? By interchanging which two signs the equation will be correct?

$$15 + 5 \div 2 - 9 \times 3 = 22$$

- a) + and -
b) \times and \div
c) \times and +
d) \div and +
5. निम्नलिखित प्रश्न में, दिए गए विकल्पों में से असंगत अक्षर/अक्षरों का चयन कीजिए।

9. निम्नलिखित में से कौन-सा अक्षर दिए गए क्रम में प्रश्नवाचक चिन्ह (?) के स्थान पर आएगा?
Which of the following letter will replace the question mark (?) in the given series?

L, N, P, R, T, V, ?

- a) X
c) V

- b) F
d) N

10. दिए गए दो संकेतन (\times और \div) को परस्पर बदलने के बाद, दिए गए समीकरण का मान क्या होगा?

After interchanging the given two signs, what will be the value of the given equation?


\times and \div

$$47 + 13 \div 65 \times 5 - 16$$

- a) 195
c) 205

- b) 190
d) 200

11. दिए गए चित्र में कितने चतुर्भुज (quadrilaterals) हैं? How many quadrilaterals are there in the given figure?



- a) 22
c) 24

- b) 26
d) 23

12. S, T की बहन है। R, S का भाई है। U, W की पत्नी है। T, U का पिता है। तो T का W से क्या संबंध है?

S is the sister of T. R is the brother of S. U is the wife of W. T is the father of U. How is T related to W?

- a) ससुर/ Father-in-law
c) पिता / Father

- b) पुत्र/ Son
d) मामा / Maternal Uncle

13. निम्नलिखित प्रश्न में, दिए गए विकल्पों में से असंगत अक्षर/अक्षरों का चयन कीजिए।
In the following question, select the odd letter/ letters from the given alternatives.

- a) LMNO
c) ABCD

- b) IJKL
d) BDEF

Five girls E, F, G, H and I are standing in a row facing north. H is on the right of G. I is on the left of G, but is on the right of F. H is on the left of E. Who is standing on the extreme right?

- a) E
b) F
c) G
d) H

19. पाँच मित्र Rajan, Roshan, Rupesh, Ranjit और Randhir एक पंक्ति में उत्तर दिशा की ओर मुख करके खड़े हैं। Randhir, Rajan के बाएँ ओर है और Roshan, Rupesh के दाहिने ओर है। यदि Roshan, Ranjit और Rupesh के बीच में है, तो Ranjit के बाएँ ओर कौन है?

Five friends Rajan, Roshan, Rupesh, Ranjit and Randhir are standing in a line facing north. Randhir is to the left of Rajan and Roshan is to the right of Rupesh. If Roshan is between Ranjit and Rupesh, who is to the left of Ranjit?

- a) राजन / Rajan
b) रूपेश / Rupesh
c) रोशन / Roshan
d) रंधीर / Randhir

20. पाँच गाँव हैं – P, Q, R, S और T। गाँव Q, P के पूर्व में और गाँव S के दक्षिण में है। गाँव R, गाँव T के पश्चिम में है, जो P के उत्तर में है। तो गाँव S, P के सापेक्ष किस दिशा में है?

There are five villages, namely P, Q, R, S and T. Village Q is to the east of P and to the south of village S. Village R is to the west of village T, which is to the north of village P. In which direction is village S with respect to village P?

- a) दक्षिण-पश्चिम / South- west
b) उत्तर-पश्चिम / North- west
c) उत्तर / North
d) उत्तर-पूर्व / North-east

21. 'K' ने 5 मीटर उत्तर दिशा में चला। फिर वह बाएँ मुड़ा और 10 मीटर चला। उसके बाद वह दाएँ मुड़ा और 20 मीटर चला। फिर वह फिर से दाएँ मुड़ा और 10 मीटर चला। तो वह प्रारंभिक बिंदु से कितनी दूरी पर है?

'K' walked 5 metres towards North, then he took a left turn and walked for 10 metres. He then took a right turn and walked for 20 metres, and again took right turn and walked 10 metres. How far he is from the starting point?

- a) 20 मीटर metres
b) 15 मीटर metres
c) 25 मीटर metres
d) 30 मीटर metres

22. कला का घर, माला के घर के ठीक सामने है। कला उत्तर-पूर्व दिशा में जाकर माला के घर पहुँचती है। यदि माला को कला के घर जाना हो, तो उसे किस दिशा में जाना चाहिए?

Kala's house is just opposite to Mala's house. Kala goes towards North- East and reaches Mala's house. If Mala has to go to Kala's house then in which direction should Mala go?

- a) दक्षिण-पश्चिम/ South-West b) उत्तर-पश्चिम/ North-West
c) उत्तर-पूर्व/ North-East d) दक्षिण-पूर्व/ South-East

23. लता पश्चिम दिशा में 20 मीटर चलती है और फिर बाएँ मुड़कर 10 मीटर चलती है। अब हर बार दाएँ मुड़ते हुए वह क्रमशः 10 मीटर, 20 मीटर और 30 मीटर चलती है। तो वह अपने प्रारंभिक बिंदु से कितनी दूरी पर है?

Latha walks 20m in west and then 10 m to the left. Now every Time turning to her right, she walks 10 m, 20 m and 30 m respectively. How far is she now from her starting point?

- a) 30 मीटर m b) 10 मीटर m
c) 20 मीटर m d) 40 मीटर m

24. M, K का भाई है। P, K की बहन है। R, P का पिता है। K और R का क्या सम्बन्ध है है?

M is brother of K. P is sister of K. R is father of P. How is K related to R?

- a) पुत्र/ Son b) पुत्री/ Daughter
c) पुत्र या पुत्री/ Son or Daughter d) डेटा अपर्याप्त/ Data inadequate

25. A, B का भाई है। C, A की बहन है। D, L का भाई है। L, B की बेटी है। तो D का चाचा कौन है?

A is the brother of B. C is the Sister of A. D is the brother of L. L is the daughter of B, then who is the uncle of D?

- a) B b) C
c) A d) डेटा अपर्याप्त है Data inadequate

26. आज शुक्रवार है। 62 दिनों बाद कौन-सा दिन होगा?

Today is Friday. After 62 days, it will be

- a) शनिवार/ Saturday b) सोमवार/ Monday
c) मंगलवार/ Tuesday d) गुरुवार/ Thursday

27. किसी शताब्दी का अंतिम दिन कभी नहीं हो सकता है

The last day of a century cannot be

- a) सोमवार/ Monday b) बुधवार/ Wednesday

- c) शुक्रवार/ Friday d) मंगलवार/ Tuesday

28. भारत का पहला गणतंत्र दिवस 26 जनवरी 1950 को मनाया गया था। यह था—

The first Republic Day of India was celebrated on 26th January, 1950. It was

- a) मंगलवार/ Tuesday b) बुधवार/ Wednesday
c) गुरुवार/ Thursday d) शुक्रवार/ Friday

29. घड़ी में समय 4:30 है। यदि मिनट की सुई दक्षिण दिशा की ओर इशारा कर रही है, तो घंटे की सुई किस दिशा की ओर इशारा करेगी?

The time on the watch is 4:30. If the minute hand points towards south, the hour hand will point towards?

- a) दक्षिण-पूर्व / South-East b) पश्चिम / West
c) उत्तर-पश्चिम/ North West d) पूर्व / East

30. घड़ी की घंटे की सुई 10 मिनट में कितने अंश (डिग्री) घूमती है?

How many degrees does an hour-hand move in 10 minutes?

- a) 10° b) 20°
c) 5° d) 15°

31. एक निश्चित सांकेतिक भाषा में, BEAM को 2349 और MEAN को 4327 के रूप में लिखा गया है। उस भाषा में N का कोड क्या होगा?

In a certain code language, BEAM is coded as 2349 and MEAN is coded as 4327. What is the code for N in that language?

- a) 2 b) 4
c) 7 d) 3

32. एक विशेष सांकेतिक भाषा में, AWAKE को ZVZJD लिखा जाता है। FRIEND को उस सांकेतिक भाषा में कैसे लिखा जाएगा?

In a certain code language, AWAKE is written as ZVZJD. How will FRIEND be written in that code?

- a) UQHDME b) EQHIDEM
c) EQHDME d) EQHDMC

33. एक विशेष सांकेतिक भाषा में, POLISH को MLIFPE लिखा जाता है। DIG को उस सांकेतिक भाषा में कैसे लिखा जाएगा?

In a certain code language, POLISH is written as MLIFPE. How will DIG be written in that code?

- a) ZFD b) AFD

c) BGD

d) EHF

34. एक विशेष सांकेतिक भाषा में, BAT को 40 लिखा जाता है। APE को उस सांकेतिक भाषा में कैसे लिखा जाएगा?

In a certain code language, BAT is written as 40. How will APE be written in that code?

a) 80

b) 70

c) 100

d) 120

35. एक विशेष सांकेतिक भाषा में, PINTU को 80 लिखा जाता है। PRIYA को उस सांकेतिक भाषा में कैसे लिखा जाएगा?

In a certain code language, PINTU is written as 80. How will PRIYA be written in that code?

a) 79

b) 69

c) 89

d) 59

प्रश्न (36-40) के लिए, (::) के एक ओर दिए गए दो युग्मों के बीच एक विशेष संबंध होता है, और (::) के दूसरी ओर एक अन्य युग्म दिया जाता है। दिए गए विकल्पों में से उस युग्म को चुनना है जिसका संबंध उसी प्रकार का हो जैसा पहले दिए गए युग्मों के बीच है। सबसे उपयुक्त विकल्प चुनें।

For questions (36-40), there is a certain relationship between two given pairs on one side of (::), and another pair is given on the other side of (::). From the given alternatives, you must choose the pair that bears the same relationship as the pairs on the given side. Choose the best alternative.

36. AZ : ZA :: BY : ?

a) YB

b) BX

c) YV

d) BB

37. मोटर : काइल :: ? / Motor : Coil :: ?

a) मेज़ : कुर्सी / Table : Chair

b) रेजिमेंट : सैनिक / Regiment : Soldier

c) पहिया : कार / Wheel : Car

d) पहिया : बेयरिंग / Wheel : Bearing

38. EAGLE : FCJPI :: CRAWL : ?

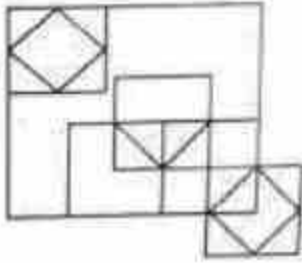
a) DTDBR

b) DTFCR

c) DTDAQ

d) DTEZQ

44. दिए गए चित्र में कितने त्रिभुज हैं? How many triangles are there in the given figure?



- a) 11
b) 15
c) 13
d) 14
45. 35 विद्यार्थी एक पंक्ति में बैठे हैं। करण बाएँ से 9वें स्थान पर है और अर्जुन दाएँ से 15वें स्थान पर है। करण और अर्जुन के बीच कितने विद्यार्थी हैं?
35 students are arranged in a row. Karan is 9th from left and Arjun is 15th from right. Find the number of students between Karan and Arjun.
- a) 10
b) 11
c) 12
d) 13

46. नवरात्रि के दौरान, प्रिया 30 दिए को एक पंक्ति में सजाती है। सोने का दिया बाएँ से 8वाँ है और चाँदी का दिया दाएँ से 10वाँ है। उनके बीच कितने दिए हैं?
During Navratri, Priya arranges 30 diyas in a row. A golden diya is 8th from the left, and a silver diya is 10th from the right. How many diyas are between them?
- a) 11
b) 15
c) 13
d) 12

47. कुछ अक्षर दिए गए हैं जिनके बाद प्रश्नवाचक चिन्ह (?) है। ये अक्षर एक विशेष क्रम का पालन कर रहे हैं। आपको सही विकल्प देना है जो प्रश्नवाचक चिन्ह के स्थान पर आ सके।
Few of the letters are given followed by a question mark (?) these letters are following a specific pattern you have to give the correct option which can replace question mark.

D, H, M, S, ?

- a) Z
b) A
c) B
d) C
48. उस अगले अगले अंक को बताइये जो प्रश्नवाचक चिन्ह (?) के स्थान पर तार्किक रूप से आएगा।
Find the next element that logically fits in place of the question mark (?)

54. गिरनार पहाड़ियाँ कहाँ स्थित हैं?

Where are the Girnar hills located?

- | | |
|--------------------------------|--------------------|
| a) मध्य प्रदेश/ Madhya Pradesh | b) गुजरात/ Gujarat |
| c) महाराष्ट्र/ Maharashtra | d) गोवा/ Goa |

55. निम्नलिखित में से कौन-सा लोकनृत्य झारखंड राज्य की जनजातियों से संबंधित है?

Which of the following folk dances belongs to the tribes of the Jharkhand state?

- | | |
|---------------------------------|----------------------------|
| a) हुट्टरी नृत्य/ Huttari Dance | b) नाटी नृत्य/ Nati Dance |
| c) मुंडारी नृत्य/ Mundari Dance | d) भवई नृत्य/ Bhavai Dance |

56. 'सत्यमेव जयते' शब्द किससे लिया गया है?

The word 'Satyameva Jayate' is taken from?

- | | |
|-------------------------------------|---------------------------|
| a) यजुर्वेद/ Yajur Veda | b) अथर्ववेद/ Atharva Veda |
| c) मुण्डक उपनिषद/ Mundaka Upanishad | d) पुराण/ Puranas |

57. मानव शरीर में सबसे कठोर ऊतक कौन-सा है?

..... is/ are the hardest tissue(s) in the human body.

- | | |
|------------------------------------|--------------------------------|
| a) एपिडर्मिस/ Epidermis | b) उपास्थि/ Cartilage |
| c) अस्थि पेशियाँ/ Skeletal Muscles | d) दाँत का इनेमल/ Tooth Enamel |

58. न्यूट्रॉन की खोज किसने की थी?

Who among the following discovered the neutrons?

- | | |
|----------------------------|---|
| a) जे. चैडविक/ J. Chadwick | b) ई. गोल्डस्टीन/ E. Goldstein |
| c) नील्स बोहर/ Neil Bohr | d) अर्नेस्ट रदरफोर्ड/ Ernest Rutherford |

59. महात्मा गांधी ने किसानों के समर्थन में गुजरात के खेड़ा ज़िले में सत्याग्रह किस वर्ष आयोजित किया था?

In which year Mahatma Gandhi organised a satyagraha in the Kheda district of Gujarat in the support of peasants?

- | | |
|---------|---------|
| a) 1916 | b) 1920 |
| c) 1919 | d) 1918 |

60. मिज़ोरम की राजधानी क्या है? What is the capital of Mizoram?

- | | |
|--------------------|----------------------|
| a) कोहिमा / Kohima | b) शिलांग / Shillong |
| c) आइज़ोल / Aizawl | d) इम्फाल / Imphal |

61. अशोक के सभी स्तंभ लेखों में सबसे लंबा कौन-सा है?

Among all the pillar edicts of Ashoka, which one is the longest one?

- a) 7वाँ स्तंभ लेख / 7th pillar edict b) 6वाँ स्तंभ लेख / 6th pillar edict
c) 5वाँ स्तंभ लेख / 5th pillar edict d) 3वाँ स्तंभ लेख / 3th pillar edict

62. निम्नलिखित में से कौन-सा पारंपरिक ऊर्जा स्रोत है? Which of these is a conventional source of energy?

- a) भू-तापीय / Geothermal b) कोयला / Coal
c) सौर / Solar d) पवन / Wind

63. निम्नलिखित में से कौन-सा अखाद्य तिलहन है? / Which of these is a non-edible oilseed?

- a) तिल / Sesame b) सूरजमुखी / Sunflower
c) अलसी / Linseed d) मूँगफली / Groundnut

64. 2026-27 के केंद्रीय बजट में कृषि-स्टैक पोर्टलों को एकीकृत करने के लिए प्रस्तावित बहुभाषी कृत्रिम बुद्धिमत्ता (AI) उपकरण का नाम क्या है?

What is the name of the multilingual Artificial Intelligence (AI) tool proposed in Union Budget 2026-27 to integrate AgriStack portals?

- a) एग्री-एआई प्लेटफॉर्म / Agri-AI Platform b) भारत-कृषि / Bharat-KRISHI
c) फ़ार्मएआई / FarmAI d) भारत-विस्तार / Bharat-VISTAAR

65. भारत में अलग 'वरिष्ठ नागरिक बजट' घोषित करने वाला पहला राज्य कौन-सा है?

Which state has become the first in India to announce a separate 'Elderly Budget'?

- a) केरल / Kerala b) महाराष्ट्र / Maharashtra
c) तमिलनाडु / Tamil Nadu d) ओडिशा / Odisha

66. अग्नि-III मध्यम दूरी की बैलिस्टिक मिसाइल किस संगठन द्वारा विकसित की गई है?

Agni-III intermediate-range ballistic missile is developed by which organization?

- a) भारतीय अंतरिक्ष अनुसंधान संगठन / Indian Space Research Organisation b) भारत डायनेमिक्स लिमिटेड / Bharat Dynamics Limited

- c) हिंदुस्तान एयरोनॉटिक्स लिमिटेड / Hindustan Aeronautics Limited
- d) रक्षा अनुसंधान एवं विकास संगठन / Defence Research and Development Organisation

67. दलमा वन्यजीव अभयारण्य किस राज्य में स्थित है? / Dalma Wildlife Sanctuary is located in which state?

- a) झारखंड / Jharkhand
- b) गुजरात / Gujarat
- c) राजस्थान / Rajasthan
- d) ओडिशा / Odisha

68. भारत का पहला राष्ट्रीय 'गौ संस्कृति संग्रहालय' उत्तर प्रदेश के किस शहर में स्थापित किया गया है?

India's first National Cow Culture Museum has been established in which city of Uttar Pradesh?

- a) वाराणसी/ Varanasi
- b) मथुरा/ Mathura
- c) गोरखपुर/ Gorakhpur
- d) अयोध्या/ Ayodhya

69. एशियाई खेल 2026 की मेज़बानी कौन-सा देश करेगा? Which country is the host of Asian Games 2026?

- a) जापान/ Japan
- b) भारत/ India
- c) इंडोनेशिया/ Indonesia
- d) चीन/ China

70. राष्ट्रीय जैव विविधता प्राधिकरण किस अधिनियम के अंतर्गत स्थापित किया गया था? / The National Biodiversity Authority was established under which Act?

- a) पर्यावरण संरक्षण अधिनियम, 1986 / Environment Protection Act, 1986
- b) वन्यजीव संरक्षण अधिनियम, 1972 / Wildlife Protection Act, 1972
- c) जैव विविधता अधिनियम, 2002 / Biological Diversity Act, 2002
- d) वन संरक्षण अधिनियम, 1980 / Forest Conservation Act, 1980

71. गुरजंत सिंह, जिन्होंने मार्च 2026 में अपनी सेवानिवृत्ति की घोषणा की, किस खेल से जुड़े हैं?

Gurjant Singh, who recently announced his retirement in March 2026, is associated with which sport?

- a) फुटबॉल/ Football
- b) हॉकी/ Hockey
- c) मुक्केबाज़ी/ Boxing
- d) बैडमिंटन/ Badminton

72. SHe-Box पोर्टल किस मंत्रालय द्वारा शुरू किया गया था? / The SHe-Box Portal was launched by which ministry?

- | | |
|---|---|
| a) गृह मंत्रालय / Ministry of Home Affairs | b) श्रम एवं रोजगार मंत्रालय / Ministry of Labour and Employment |
| c) महिला एवं बाल विकास मंत्रालय / Ministry of Women and Child Development | d) विधि एवं न्याय मंत्रालय / Ministry of Law and Justice |

73. भारत का पहला प्रोटोटाइप फास्ट ब्रीडर रिएक्टर (PFBR) किस राज्य में स्थित है? / India's first Prototype Fast Breeder Reactor (PFBR) is located in which state?

- | | |
|--------------------------|----------------------------------|
| a) तमिलनाडु / Tamil Nadu | b) कर्नाटक / Karnataka |
| c) केरल / Kerala | d) आंध्र प्रदेश / Andhra Pradesh |

74. अंतर्राष्ट्रीय परमाणु ऊर्जा एजेंसी (IAEA) का मुख्यालय कहाँ स्थित है? / Where is the headquarters of International Atomic Energy Agency (IAEA) located?

- | | |
|-------------------------|--------------------|
| a) न्यूयॉर्क / New York | b) वियना / Vienna |
| c) लंदन / London | d) जेनेवा / Geneva |

75. झारखंड राष्ट्रीय आंदोलन में प्रसिद्ध भाई कौन थे? / Who were the famous brothers in the Jharkhand National Movement?

- | | |
|--|--|
| a) सुरजू भगत और लालू भगत / Surju Bhagat and Lalu Bhagat | b) तिलका मांझी और बिरसा मुंडा / Tilka Manjhi and Birsa Munda |
| c) सिद्धू मुर्मू और कान्हू मुर्मू / Siddhu Murmu and Kanhu Murmu | d) जात्रा उराँव और राम मांझी / Jatra Oraon and Ram Manjhi |

76. झारखंड में छठ पूजा किस देवता की आराधना के लिए की जाती है? / Chhath Puja in Jharkhand is dedicated to worship which deity?

- | | |
|-------------------|----------------------------|
| a) चंद्रमा / Moon | b) नदी देवता / River deity |
| c) सूर्य / Sun | d) वन देवता / Forest deity |

77. निम्नलिखित में से कौन-सी रबी फ़सलें हैं? / Which of the following are Rabi crops?

- | | |
|---|---|
| a) ज्वार और बाजरा / Jowar and Bajra | b) सरसों और रेपसीड / Rapeseed and Mustard |
| c) खरबूजा और लौकी / Muskmelon and Gourd | d) मक्का और गन्ना / Maize and Sugarcane |

78. भारत के निम्नलिखित केंद्र शासित प्रदेशों में से किसका क्षेत्रफल सबसे बड़ा है? / Which among the following Union Territory of India has the largest area?

- | | |
|--|--|
| a) दिल्ली / Delhi | b) अंडमान और निकोबार द्वीपसमूह / Andaman & Nicobar Islands |
| c) दादरा और नगर हवेली / Dadra & Nagar Haveli | d) लद्दाख / Ladakh |

79. राम का पुल या रामसेतु निम्नलिखित में से किस जलसंधि में स्थित है? / Rama's Bridge or Rama Setu is located in which among the following straits?

- | | |
|----------------------------------|-------------------------------------|
| a) बेरिंग जलसंधि / Bering Strait | b) पाल्क जलसंधि / Palk Strait |
| c) कुक जलसंधि / Cook Strait | d) तेबराउ जलसंधि / Strait of Tebrau |

80. भारत की सबसे पुरानी पर्वत श्रृंखला कौन-सी है? / Which of the following is the oldest mountain range in India?

- | | |
|-----------------------|----------------------|
| a) हिमालय / Himalayas | b) नीलगिरि / Nilgiri |
| c) विंध्य / Vindhya | d) अरावली / Aravalli |

81. निम्नलिखित में से किस प्रकार की मिट्टी को सामान्यतः 'सेल्फ मल्टिचिंग साइल' कहा जाता है? / Which of the following type of soils is commonly known as 'self-mulching soil'?

- | | |
|-----------------------------|-----------------------------|
| a) काली मिट्टी / Black soil | b) भूरी मिट्टी / Brown soil |
| c) लाल मिट्टी / Red soil | d) धूसर मिट्टी / Grey soil |

82. भारत का सबसे बड़ा तेल क्षेत्र (Oilfield) निम्नलिखित में से कौन-सा है? / Which of the following is the largest oil field in India?

- | | |
|---|--|
| a) बॉम्बे हाई ऑयलफील्ड / Bombay High Oilfield | b) अंकलेश्वर ऑयलफील्ड / Ankleswar Oilfield |
| c) नाहरकटिया ऑयलफील्ड / Naharkatia Oilfield | d) डिगबोई ऑयलफील्ड / Digboy Oilfield |

83. नरोरा परमाणु ऊर्जा स्टेशन भारत के किस स्थान पर स्थित है? / Narora Atomic Power Station is situated in which of the following places of India?

- | | |
|------------------------|---------------------------------|
| a) गुजरात / Gujarat | b) उत्तर प्रदेश / Uttar Pradesh |
| c) कर्नाटक / Karnataka | d) महाराष्ट्र / Maharashtra |

84. भारत में अनेक कोयला क्षेत्र किस घाटी में पाए जाते हैं? / In India, there are many coal fields found in ...
- a) गंगा घाटी / Ganga Valley b) कावेरी घाटी / Kaveri Valley
c) कृष्णा घाटी / Krishna Valley d) दामोदर घाटी / Damodar Valley
85. भारत का सबसे ऊँचा पर्वत शिखर कौन-सा है? / The highest peak in India is ____
- a) कामेत / Kamet b) नंदाकोट / Nandakot
c) नंदा देवी / Nanda Devi d) के२ (गॉडविन ऑस्टिन) / K2
(Godwin Austen)
86. 2011 क्रिकेट विश्व कप, जिसमें भारत ने अपना दूसरा विश्व कप खिताब जीता, में 'प्लेयर ऑफ द सीरीज़' कौन थे? / Who was the "player of the series" in the 2011 Cricket World Cup, in which India won its second world cup champion title?
- a) तिलकरत्ने दिलशान / b) सचिन तेंदुलकर / Sachin
Tillakaratne Dilshan Tendulkar
c) कुमार संगकारा / Kumar d) युवराज सिंह / Yuvraj Singh
Sangakkara
87. निम्नलिखित में से कौन-सा सूक्ष्मजीव पोलियो और चिकनपॉक्स जैसी बीमारियाँ उत्पन्न करता है? / Which of the following micro-organism causes diseases like polio and chicken pox?
- a) प्रोटोज़ोआ / Protozoa b) बैक्टीरिया / Bacteria
c) विषाणु / Virus d) शैवाल / Algae
88. दालें किस कुल (Family) से प्राप्त होती हैं? / Pulses are obtained from the family of ____
- a) लिलीएसी / Liliaceae b) फुंगी / Fungi
c) साइकाडेसी / Cycadaceae d) लेग्यूमिनोसी / Leguminosae
89. स्वराज पार्टी निम्नलिखित में से किस घटना का परिणाम थी? / Swaraj party was outcome of which among the following incidents?
- a) चौरी चौरा / Chauri Chaura b) भारत छोड़ो आंदोलन / Quit
India Movement
c) साइमन कमीशन का आगमन / d) बारडोली सत्याग्रह / Bardoli
Arrival of Simon Commission Satyagraha

90. भारतीय पुनर्जागरण के जनक किसे कहा जाता है? / Who is known as the 'Father of Indian Renaissance'?

- | | |
|--------------------------------------|---|
| a) विक्रम साराभाई / Vikram Sara Bhai | b) राजा राम मोहन राय / Raja Ram Mohan Roy |
| c) राम गोपाल वर्मा / Ram Gopal Verma | d) लाला लाजपत राय / Lala Lajpat Rai |

91. भारत में 'राष्ट्रीय विज्ञान दिवस' 28 फरवरी को मनाया जाता है। यह किस वैज्ञानिक की उपलब्धि को चिह्नित करता है?

In India, 'National Science Day' is celebrated on February 28 to mark the achievement of which scientist?

- | | |
|------------------------------------|---|
| a) सी. वी. रमन/ C. V. Raman | b) होमी जे. भाभा/ Homi J. Bhabha |
| c) विक्रम साराभाई/ Vikram Sarabhai | d) ए. पी. जे. अब्दुल कलाम/ A. P. J. Abdul Kalam |

92. निम्नलिखित में से कौन भारतीय अंतरिक्ष अनुसंधान संगठन (ISRO) के पहले अध्यक्ष थे?

Who among the following was the first chairman of the Indian Space Research Organisation?

- | | |
|------------------------------------|------------------------------------|
| a) विक्रम साराभाई/ Vikram Sarabhai | b) एम. जी. के. मेनन/ M.G. K. Menon |
| c) सतीश धवन/ Satish Dhawan | d) होमी जे. भाभा/ Homi J. Bhabha |

93. Gemini AI मॉडल किस कंपनी द्वारा विकसित किया गया था?

Which company developed the Gemini AI model?

- | | |
|-----------------|-------------------|
| a) एप्पल/ Apple | b) अमेज़न/ Amazon |
| c) गूगल/ Google | d) आईबीएम/ IBM |

94. भारतीय राज्य विधान सभा चुनाव में मतदान करने की न्यूनतम आयु कितनी है?

What is the minimum age to vote in the State Legislative Elections in India?

- | | |
|----------------------|----------------------|
| a) 16 वर्ष/ 16 years | b) 18 वर्ष/ 18 years |
| c) 21 वर्ष/ 21 years | d) 25 वर्ष/ 25 years |

95. आर्य समाज के संस्थापक कौन थे? Who was the founder of Arya Samaj?

- | | |
|---|--|
| a) रवीन्द्रनाथ टैगोर/ Rabindranath Tagore | b) स्वामी विवेकानंद/ Swami Vivekananda |
| c) केशव चंद्र सेन/ Keshub Chandra Sen | d) दयानंद सरस्वती/ Dayanand Saraswati |

96. भटियाली लोक संगीत, जिसे प्रायः मछुआरे गाते हैं, किस राज्य से संबंधित है?

With which of the following states is the Bhatiali folk music, which is mostly sung by the fishermen, associated?

- a) केरल/ Kerala
b) आंध्र प्रदेश/ Andhra Pradesh
c) पश्चिम बंगाल/ West Bengal
d) ओडिशा/ Odisha

97. 'बृहत् कथा कोश' (Brihat Katha Kosh) के लेखक निम्नलिखित में से कौन थे?

Who among the following was the author of 'Brihat Katha Kosh'?

- a) क्षेमेन्द्र / Kshemendra
b) हरिसेन / Harisen
c) दंडिन/ Dandin
d) भवभूति / Bhavabhuti

98. भारत ने एशियाई खेलों की मेज़बानी पहली बार किस वर्ष की थी?

In which year has India hosted the Asian Games for the first time?

- a) 1951
b) 1949
c) 1948
d) 1950

99. भारतीय संविधान के किस भाग में मौलिक अधिकारों की छह व्यापक श्रेणियाँ दी गई हैं?

In which part of the Constitution will you find the six broad categories of Fundamental Rights?

- a) I
b) III
c) II
d) IV

100. भारत में वित्तीय वर्ष 1 अप्रैल से शुरू होता है और को समाप्त होता है। The

financial year in India starts from 1st April and ends on

- a) 31 जुलाई/ 31st July
b) 30 जून/ 30th June
c) 31 मई/ 31st May
d) 31 मार्च/ 31st March

English Language and comprehension:

In each of the following questions (101-110), out of the four alternatives, choose the one which best expresses the **antonym/ opposite in meaning** to the given word:

101. Dilate

- a) Terminate
b) Compress
c) Expand
d) Weaken

102. Mysterious

- a) Complicated
b) Bright

In each of the following questions (121-130), out of the four alternatives, select the alternatives which best expresses the meaning of the idiom/phrase.

121. Turn a blind eye

- a) Not able to see the obvious truth
- b) Hide the ugly truth from someone
- c) Pretend not to notice
- d) Stay away from bad habits

122. Easy come, easy go

- a) If you forcibly tie up a person in a relationship that person will run away
- b) No matter what, one should never lose temper
- c) Every task is easy for a talented person
- d) Something acquired without effort may be lost without regret

123. Down memory lane

- a) Pleasant memories
- b) Unpleasant thoughts
- c) Road to sadness
- d) Comical situation

124. New kid on the block

- a) New rules which are bound to fail
- b) A junior
- c) A new social trend
- d) A newcomer

125. Get into a soup

- a) To make things difficult
- b) To be worrisome
- c) To be familiar of
- d) To get an advantage

126. High and Low

- a) Everywhere
- b) Optimism
- c) Hypocrisy
- d) Experience

127. Ended in a fiasco

- a) A complete failure
- b) A successful event
- c) Changed one completely
- d) Twisted around

128. To judge a book by its cover

- a) To rely on outward appearance
b) To buy books after seeing the colourful cover
c) To read the outer cover only
d) To go with popular opinions
129. Rome was not built in a day
a) It takes time to create great things
b) You have to win many wars to build an empire
c) A task done hurriedly fails completely
d) Building anything worth while requires skill
130. Pandora's box
a) Arguments for and against
b) To act dubiously
c) Popular
d) A prolific source of trouble

In each of the following questions (131-140), out of the four alternatives, choose the one which can substitute in the given word(s)/sentence.

131. Capable of being read clearly
a) Illegible
b) Legitimate
c) Legible
d) Readings
132. Something chosen as a symbol to bring good luck
a) Charm
b) Mascot
c) Luck toy
d) Totem
133. The first model of a new device.
a) Prototype
b) Sculpture
c) Icon
d) Photograph
134. A person learning a trade under someone
a) Assistant
b) Secretary
c) Clerk
d) Apprentice
135. That which is unlawful
a) Legal
b) Court
c) Bail
d) Illicit
136. One whose wife is dead
a) Bachelor
b) Spinster

- c) Widower
d) Widow
137. Overturn in water
a) Drown
b) Swim
c) Wreck
d) Capsize
138. Free from punishment
a) Posterity
b) Stoicism
c) Impunity
d) Wath
139. Easily duped or fooled
a) Bigot
b) Gullible
c) Ridicule
d) Venerable
140. Fluent and clear in speech
a) Emotional
b) Enthusiastic
c) Articulate
d) Confident

In each of the following questions (141-145), a part of the sentence is printed in bold. Below are given alternatives to the bold part at (a), (b) and (c) which may improve the sentence. Choose the correct alternative.

141. The hill is too high **for climbing**.
a) to climb
b) for going up
c) for climbing up
d) No improvement
142. I can always **count on him** in times of difficulty.
a) count him on
b) count on he
c) count at him
d) No improvement
143. There are **schools in either sides** of the road.
a) schools on either side
b) school on either side
c) school on either sides
d) No improvement
144. We **acted your** instructions
a) acted upon your
b) acted your very
c) acted over your
d) No improvement
145. Sapnaa has just **gone to** her family in Mumbai.
a) visited
b) found

c) joined

d) No improvement

In each of the following questions (146-148), a sentence has been given in Active/Passive voice. Out of four alternatives suggested, select the one which best expresses the same sentence in Passive/Active voice.

146. I had to stop all my work to complete this project.

a) All other work has to be stopped to complete this project by me

b) For completing this project all other work must be stopped

c) For completing this project I had to stop all my work

d) To complete this project all other work had been stopped by me

147. Who teaches you English?

a) By whom were you taught English?

b) By whom are you taught English?

c) English is taught by whom?

d) By whom will you be taught English?

148. We hope that we shall win the match.

a) The match is hoped to be won.

b) Match winning is our hope.

c) It is hoped that the match will be won by us.

d) Winning the match is hoped by us.

In each of the following questions (149-150), a sentence has been given in Direct/Indirect speech. Out of four alternatives suggested, select the one, which best expresses the same sentence in Direct/Indirect speech.

149. "What did you say", she said.

a) She said what I said

b) She asked me what I had said

c) She told me what I said

d) She spoke about what I said

150. She asked me not to go to Chennai

a) She told me, "Don't go to Chennai"

b) She is telling me, "Don't go to Chennai"

c) She was telling me, "Don't go to Chennai"

d) She told me, "Go to Chennai"

B

In each of the following questions (151-155), rearrange the parts of the sentence in correct order

151. Aggregate levels of under nutrition in India
P. remain shockingly high; despite the impressive
Q. stunting in the last decade
R. reduction in
- | | |
|--------|--------|
| a) PRQ | b) QPR |
| c) RPQ | d) QRP |
152. Ironically, in spite of a decline in poverty,
P. the proportion of
Q. the population receiving welfare
R. benefits has risen sharply
- | | |
|--------|--------|
| a) QRP | b) PQR |
| c) RPQ | d) QPR |
153. There was a second part
P. are ambivalent about
Q. many people
R. of her decision which
- | | |
|--------|--------|
| a) QRP | b) QPR |
| c) PRQ | d) RQP |
154. This alone
P. should alert us to what
Q. is actually about
R. the demand for a Uniform Civil Code
- | | |
|--------|--------|
| a) PRQ | b) PQR |
| c) QPR | d) RPQ |
155. It is not uncommon
P. to push for public expenditure
Q. at a time
R. when private investment sentiment is weak
- | | |
|--------|--------|
| a) QRP | b) PQR |
| c) RPQ | d) QPR |

Directions (156-160): In the following passage, some of the words have been left out. Read the passage carefully and select the correct answer for the given numbered blank out of the four alternatives.

The battle between attackers and the attacked is becoming still more **(156)**. Faced with potentially new cyber **(157)**, the danger to India's economic and national security is going **(158)** geometrical progression. To be forearmed, with **(159)** offensive cyber operations and **(160)** cyber security, is essential.

- | | | |
|------|-------------------------------------|----------------------------------|
| 156. | a) stronger
c) inclined | b) asymmetric
d) strange |
| 157. | a) onslaughts
c) world | b) attack
d) intrusions |
| 158. | a) down as
c) up on | b) down for
d) up in |
| 159. | a) the two
c) either | b) both
d) neither |
| 160. | a) more stronger
c) strengthened | b) strongest
d) strengthening |

Directions (161-165): In the following passage, some of the words have been left out. Read the passage carefully and select the correct answer for the given numbered blank out of the four alternatives.

Our Constitution is named **(161)**, because it is in the hands not of the **(162)** but of the many. But our laws secure equal **(163)** for all in their private disputes and our public opinion welcomes and **(164)** talents in every branch of achievement. And as we give free play to **(165)** in our public life, so we carry the same spirit into our daily relation with one another.

- 161 a) democracy
c) plutocracy
- b) aristocracy
d) theocracy
- 162 a) liberals
c) few
- b) little
a) people
- 163 a) remuneration
c) rights
- b) justice
d) power
- 164 a) humiliate
c) negotiate
- b) judge
d) honours
- 165 a) some
c) few
- b) all
d) little

Directions (166-170): Read the following passage carefully and choose the most appropriate answer to each question out of the four alternatives.

The savings of certain wild animals from extinction has for many years been a problem for zoologists and other specialists, but more recently the problem has become so acute, and has received so much publicity, that most people are now concerned about it. This may at first seem strange because one of the most gratifying developments of the last few years has been the passing of strict laws to protect wild animals and the consequent decline in the hunting of big-game for sport. Why is it, then that some rare wild animals are still threatened with extinction and even some of the less ones are rapidly declining in number?

One reason is the 'march of civilization'. When an area is wholly cleared of vegetation to make room for new towns, factory sites or hydroelectric plant the natural home of several species is destroyed. The displaced animal must either migrate to another area or perish. Even the clearing of land for a road or an airfield may involve 'pushing back' the jungle and the smaller the area in which wild animals compete for a living, the smaller the number that can hope to survive.

166. According to the author what is referred to 'this may at first seem strange'?
- a) The problem of saving certain wild animals
 - b) The hunting of big-game
 - c) The clearing vegetation
 - d) The extinction of animals
167. What is meant by 'pushing back the jungle'?
- a) To move jungle away
 - b) To compete for a living
 - c) Clearing of vegetation to make towns and factory sites
 - d) Removing the jungle
168. What has the passing of strict laws resulted in?
- a) A problem for zoologists
 - b) The decline of big-game hunting for sport
 - c) Smaller locations for towns
 - d) Wiping out wild animals in smaller number
169. What is the main reason for an area to be wholly cleared?
- a) The march of civilization
 - b) To make rooms for rare animals
 - c) To grow trees
 - d) To reduce the area of the jungle
170. The meaning of the word 'gratifying' is
- a) resulting
 - b) reducing
 - c) pleasing
 - d) declining

Directions (171-175): Read the following passage carefully and choose the most appropriate answer to each question out of the four alternatives.

Today perhaps your only association with the word 'polio' is the Sabin Oral Vaccine that protects children from the disease, sixty-five years' ago, this was not so. The dreaded disease, which mainly affects the brain and the spinal cord, causes stiffening and weakening of the muscles, crippling and paralysis- which is why I am in a wheel-chair today. If somebody had predicted, when I was born, that this would happen to me, no one would have believed it. I was the seventh child in a family of four pairs of brothers and sister, with a huge 23- year gap between the first and the last. I was told that, unlike the others,

I was so fair and brown-haired that I looked more like a foreigner than a Dawood Bohri. I was also considered to the healthiest of the brood.

171. In this passage, the word "brood" refers to
- a) Polio victims
 - b) Foreign children
 - c) Children in the family
 - d) Indian children
172. In his childhood, the narrator looked "more like a foreigner than a Dawood Bohri". This was because he was
- a) A foreign child
 - b) A very healthy boy
 - c) Tall and smart
 - d) Fair and brown-haired
173. In his childhood, the narrator was
- a) A weakling
 - b) Very healthy
 - c) Tall and slim
 - d) Short and stout
174. The narrator was the seventh child in a family of
- a) 8 children
 - b) 16 children
 - c) 10 children
 - d) 4 children
175. In this passage, the narrator is a patient of
- a) Heart disease
 - b) Polio
 - c) Paralysis
 - d) Nervous weakness
176. Use the appropriate article for the sentence given below.
Platinum is _____ valuable metal.
- a) a
 - b) the
 - c) an
 - d) No article
177. Choose the correct preposition from the given options to complete the sentence.
I will think _____ the matter.
- a) for
 - b) on
 - c) about
 - d) at
178. He is very brainy. That is, he is very _____. Complete the sentence
- a) dull
 - b) big headed
 - c) unintelligent
 - d) intelligent

179. Fill in the blank using the right preposition.

I was _____ 10 Downing Street today.

- | | |
|---------|-------|
| a) into | b) in |
| c) at | d) on |

180. Past participle of "Sow" is

- | | |
|----------|---------|
| a) sew | b) sown |
| c) sowed | d) sewn |

For the following Questions (181-185), some part of the sentence may have errors. Find out which part of the sentence has an error and select the appropriate option. If a sentence is free from error, select 'No Error'.

181. My elder sister (A)/ is much smarter (B)/ than me. (C)/ No error (D)

- | | |
|--------|--------|
| a) (A) | b) (B) |
| c) (C) | d) (D) |

182. How long (A)/ have you been (B)/ learning English for? (C)/ No error (D)

- | | |
|--------|--------|
| a) (A) | b) (B) |
| c) (C) | d) (D) |

183. All the furniture (A)/ have been (B)/ sent to the new house (C)/ No error (D)

- | | |
|--------|--------|
| a) (A) | b) (B) |
| c) (C) | d) (D) |

184. The large ballons (A)/ I bought for Christmas (B)/ is very nice (C)/ No error (D)

- | | |
|--------|--------|
| a) (A) | b) (B) |
| c) (C) | d) (D) |

185. Yesterday after (A)/ the train stopped (B)/ I went home on taxi along with my assistant. (C)/ No error(D)

- | | |
|--------|--------|
| a) (A) | b) (B) |
| c) (C) | d) (D) |

In each of the following questions (186-190), a sentence is given with blank to be filled in with an appropriate word. Select the correct alternative out of the four.

186. He cannot dissociate himself _____ what he said earlier.

- a) With
c) Off
- b) Of
d) from

187. There is a lovely _____ of the hills from the window.
a) Sight
c) view

b) look
d) impression

188. I could not _____ what he wanted to say.
a) make over
c) make

b) make out
d) make in

189. The captain of the unit _____ the soldiers to follow him.
a) Warned
c) recommended

b) asked
d) ordered

190. Mr. Sachin runs _____ than Kapil.
a) Faster
c) more fast

b) fastest
d) fast

In each of the following questions (191-200), out of the four alternatives, choose the one which best expresses the meaning to the given word:

191. Crooked
a) Twisted
c) Offspring

b) Straight
d) Harmonious

192. Genre
a) Celebrity
c) Category

b) Common man
d) Pleasant

193. Development
a) Enrich
c) Amplify

b) Evolution
d) Promotion

194. Gluttony
a) Greed
c) Enormous

b) Giant
d) Stomach

195. Revamp
a) Retreat

b) Repeat

- c) Restructure
- d) Retrial
196. Recollect
- a) Return
- b) Remember
- c) Unite
- d) Assemble
197. Grave
- a) Dead
- b) Still
- c) Serious
- d) Sad
198. Advance
- a) Bend
- b) Give
- c) Change
- d) Move forward
199. Subsidy
- a) Endowment
- b) Forfeit
- c) Mulct
- d) Reward
200. Exactly
- a) Different
- b) Precisely
- c) Similar
- d) Same

Use For Rough Work

Use For Rough Work

Use For Rough Work

General Intelligence & Reasoning

1. दिए गए चित्र में कितने चतुर्भुज (quadrilaterals) हैं? How many quadrilaterals are there in the given figure?

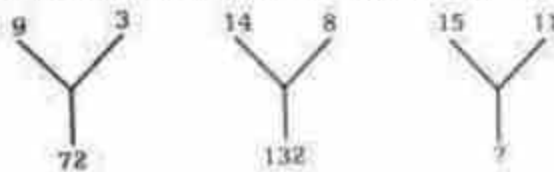


- a) 22
b) 26
c) 24
d) 23
2. S, T की बहन है। R, S का भाई है। U, W की पत्नी है। T, U का पिता है। तो T का W से क्या संबंध है?
S is the sister of T. R is the brother of S. U is the wife of W. T is the father of U. How is T related to W?
- a) ससुर/ Father-in-law
b) पुत्र/ Son
c) पिता / Father
d) मामा / Maternal Uncle

3. निम्नलिखित प्रश्न में, दिए गए विकल्पों में से असंगत अक्षर/अक्षरों का चयन कीजिए।
In the following question, select the odd letter/ letters from the given alternatives.

- a) LMNO
b) IJKL
c) ABCD
d) BDEF

4. प्रश्नवाचक चिन्ह (?) का मान पता कीजिये। Find the value of the question mark (?)



- a) 104
b) 200
c) 180
d) 125
5. प्रश्नवाचक चिन्ह (?) का मान पता कीजिये। Find the value of the question mark (?)

7	8	11
9	5	9
11	3	6
8	6	?

- a) 12
b) 14
c) 16
d) 20

6. प्रश्नवाचक चिन्ह (?) का मान पता कीजिये । / Find the value of the question mark (?)

8	7	11
64	49	121
48	35	?

- a) 144
b) 99
c) 50
d) 89

7. P, Q, R और S कैरम खेल रहे हैं। P, R और S, Q साथी हैं। R पश्चिम की ओर देख रहा है और S, R के दाहिने ओर बैठा है। तो Q किस दिशा में देख रहा है?

P, Q, R and S are playing carrom. P, R and S, Q are partners, S is sitting to the right of R who faces west, then Q faces which direction?

- a) दक्षिण / South
b) पूर्व / East
c) पश्चिम / West
d) उत्तर / North

8. पाँच लड़कियाँ E, F, G, H और I एक पंक्ति में उत्तर दिशा की ओर मुख करके खड़ी हैं। H, G के दाहिने ओर है। I, G के बाएँ ओर है, लेकिन F के दाहिने ओर है। H, E के बाएँ ओर है। तो सबसे दाहिने छोर पर कौन खड़ी है?

Five girls E, F, G, H and I are standing in a row facing north. H is on the right of G. I is on the left of G, but is on the right of F. H is on the left of E. Who is standing on the extreme right?

- a) E
b) F
c) G
d) H

9. पाँच मित्र Rajan, Roshan, Rupesh, Ranjit और Randhir एक पंक्ति में उत्तर दिशा की ओर मुख करके खड़े हैं। Randhir, Rajan के बाएँ ओर है और Roshan, Rupesh के दाहिने ओर है। यदि Roshan, Ranjit और Rupesh के बीच में है, तो Ranjit के बाएँ ओर कौन है?

Five friends Rajan, Roshan, Rupesh, Ranjit and Randhir are standing in a line facing north. Randhir is to the left of Rajan and Roshan is to the right of Rupesh. If Roshan is between Ranjit and Rupesh, who is to the left of Ranjit?

- a) राजन / Rajan
b) रूपेश / Rupesh
c) रोशन / Roshan
d) रंधीर / Randhir

10. पाँच गाँव हैं – P, Q, R, S और T। गाँव Q, P के पूर्व में और गाँव S के दक्षिण में है। गाँव R, गाँव T के पश्चिम में है, जो P के उत्तर में है। तो गाँव S, P के सापेक्ष किस दिशा में है?
There are five villages, namely P, Q, R, S and T. Village Q is to the east of P and to the south of village S. Village R is to the west of village T, which is to the north of village P. In which direction is village S with respect to village P?
- a) दक्षिण-पश्चिम / South- west b) उत्तर-पश्चिम/ North- west
c) उत्तर/ North d) उत्तर-पूर्व / North-east
11. 'K' ने 5 मीटर उत्तर दिशा में चला। फिर वह बाएँ मुड़ा और 10 मीटर चला। उसके बाद वह दाएँ मुड़ा और 20 मीटर चला। फिर वह फिर से दाएँ मुड़ा और 10 मीटर चला। तो वह प्रारंभिक बिंदु से कितनी दूरी पर है? 'K' walked 5 metres towards North, then he took a left turn and walked for 10 metres. He then took a right turn and walked for 20 metres, and again took right turn and walked 10 metres. How far he is from the starting point?
- a) 20 मीटर metres b) 15 मीटर metres
c) 25 मीटर metres d) 30 मीटर metres
12. कला का घर, माला के घर के ठीक सामने है। कला उत्तर-पूर्व दिशा में जाकर माला के घर पहुँचती है। यदि माला को कला के घर जाना हो, तो उसे किस दिशा में जाना चाहिए?
Kala's house is just opposite to Mala's house. Kala goes towards North- East and reaches Mala's house. If Mala has to go to Kala's house then in which direction should Mala go?
- a) दक्षिण-पश्चिम/ South-West b) उत्तर-पश्चिम/ North-West
c) उत्तर-पूर्व/ North-East d) दक्षिण-पूर्व/ South-East
13. लता पश्चिम दिशा में 20 मीटर चलती है और फिर बाएँ मुड़कर 10 मीटर चलती है। अब हर बार दाएँ मुड़ते हुए वह क्रमशः 10 मीटर, 20 मीटर और 30 मीटर चलती है। तो वह अपने प्रारंभिक बिंदु से कितनी दूरी पर है?
Latha walks 20m in west and then 10 m to the left. Now every Time turning to her right, she walks 10 m, 20 m and 30 m respectively. How far is she now from her starting point?
- a) 30 मीटर m b) 10 मीटर m
c) 20 मीटर m d) 40 मीटर m
14. M, K का भाई है। P, K की बहन है। R, P का पिता है। K और R का क्या सम्बन्ध है है?

M is brother of K. P is sister of K. R is father of P. How is K related to R?

- | | |
|-------------------------------------|------------------------------------|
| a) पुत्र/ Son | b) पुत्री/ Daughter |
| c) पुत्र या पुत्री/ Son or Daughter | d) डेटा अपर्याप्त/ Data inadequate |

15. A, B का भाई है। C, A की बहन है। D, L का भाई है। L, B की बेटी है। तो D का चाचा कौन है?

A is the brother of B. C is the Sister of A. D is the brother of L. L is the daughter of B, then who is the uncle of D?

- | | |
|------|--------------------------------------|
| a) B | b) C |
| c) A | d) डेटा अपर्याप्त है Data inadequate |

16. आज शुक्रवार है। 62 दिनों बाद कौन-सा दिन होगा?

Today is Friday. After 62 days, it will be

- | | |
|---------------------|----------------------|
| a) शनिवार/ Saturday | b) सोमवार/ Monday |
| c) मंगलवार/ Tuesday | d) गुरुवार/ Thursday |

17. किसी शताब्दी का अंतिम दिन कभी नहीं हो सकता है

The last day of a century cannot be

- | | |
|---------------------|----------------------|
| a) सोमवार/ Monday | b) बुधवार/ Wednesday |
| c) शुक्रवार/ Friday | d) मंगलवार/ Tuesday |

18. भारत का पहला गणतंत्र दिवस 26 जनवरी 1950 को मनाया गया था। यह था—

The first Republic Day of India was celebrated on 26th January, 1950. It was

- | | |
|----------------------|----------------------|
| a) मंगलवार/ Tuesday | b) बुधवार/ Wednesday |
| c) गुरुवार/ Thursday | d) शुक्रवार/ Friday |

19. घड़ी में समय 4:30 है। यदि मिनट की सुई दक्षिण दिशा की ओर इशारा कर रही है, तो घंटे की सुई किस दिशा की ओर इशारा करेगी?

The time on the watch is 4:30. If the minute hand points towards south, the hour hand will point towards?

- | | |
|------------------------------|------------------|
| a) दक्षिण-पूर्व / South-East | b) पश्चिम / West |
| c) उत्तर-पश्चिम/ North West | d) पूर्व / East |

20. घड़ी की घंटे की सुई 10 मिनट में कितने अंश (डिग्री) घूमती है?

How many degrees does an hour-hand move in 10 minutes?

- | | |
|--------|--------|
| a) 10° | b) 20° |
|--------|--------|

c) 5°

d) 15°

21. एक निश्चित सांकेतिक भाषा में, BEAM को 2349 और MEAN को 4327 के रूप में लिखा गया है। उस भाषा में N का कोड क्या होगा?

In a certain code language, BEAM is coded as 2349 and MEAN is coded as 4327. What is the code for N in that language?

a) 2

b) 4

c) 7

d) 3

22. एक विशेष सांकेतिक भाषा में, AWAKE को ZVZJD लिखा जाता है। FRIEND को उस सांकेतिक भाषा में कैसे लिखा जाएगा?

In a certain code language, AWAKE is written as ZVZJD. How will FRIEND be written in that code?

a) UQHDME

b) EQHIDEM

c) EQHDME

d) EQHDMC

23. एक विशेष सांकेतिक भाषा में, POLISH को MLIFPE लिखा जाता है। DIG को उस सांकेतिक भाषा में कैसे लिखा जाएगा?

In a certain code language, POLISH is written as MLIFPE. How will DIG be written in that code?

a) ZFD

b) AFD

c) BGD

d) EHF

24. एक विशेष सांकेतिक भाषा में, BAT को 40 लिखा जाता है। APE को उस सांकेतिक भाषा में कैसे लिखा जाएगा?

In a certain code language, BAT is written as 40. How will APE be written in that code?

a) 80

b) 70

c) 100

d) 120

25. एक विशेष सांकेतिक भाषा में, PINTU को 80 लिखा जाता है। PRIYA को उस सांकेतिक भाषा में कैसे लिखा जाएगा?

In a certain code language, PINTU is written as 80. How will PRIYA be written in that code?

a) 79

b) 69

c) 89

d) 59

प्रश्न (26-30) के लिए, (::) के एक ओर दिए गए दो युग्मों के बीच एक विशेष संबंध होता है, और (::) के दूसरी ओर एक अन्य युग्म दिया जाता है। दिए गए विकल्पों में से उस युग्म को चुनना है जिसका संबंध उसी प्रकार का हो जैसा पहले दिए गए युग्मों के बीच है। सबसे उपयुक्त विकल्प चुनें।

For questions (26-30), there is a certain relationship between two given pairs on one side of (::), and another pair is given on the other side of (::). From the given alternatives, you must choose the pair that bears the same relationship as the pairs on the given side. Choose the best alternative.

26. AZ : ZA :: BY : ?

- a) YB
b) BX
c) YV
d) BB

27. मोटर : काइल :: ? / Motor : Coil :: ?

- a) मेज़ : कुर्सी / Table : Chair
b) रेजिमेंट : सैनिक / Regiment : Soldier
c) पहिया : कार / Wheel : Car
d) पहिया : बेयरिंग / Wheel : Bearing

28. EAGLE : FCJPI :: CRAWL : ?

- a) DTDBR
b) DTFCR
c) DTDAQ
d) DTEZQ

29. 4 : 19 :: 7 : ?

- a) 28
b) 52
c) 68
d) 49

30. पंखा : पंख :: पहिया : ? / Fan : Wings :: Wheel : ?

- a) गाड़ियाँ / Cars
b) हवा / Air
c) तीलियाँ / Spokes
d) गोल / Round

31. उस अक्षर-संयोजन का चयन कीजिए, जिसे दिए गए क्रम में रिक्त स्थानों पर क्रमवार रखने से वह क्रम तार्किक रूप से पूर्ण हो जाएगा।

Select the combination of letters that when sequentially placed in the blanks of the given series will logically complete the series.

A _ A _ C A B _ B _ A _ _ B C A B A _ C

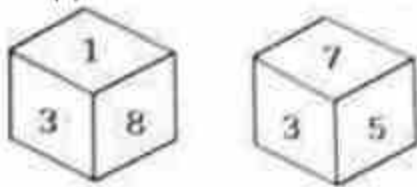
- a) BABACBA
b) BBABBCB
c) BBACABB
d) BBACBAB

32. निम्नलिखित समीकरण में प्रश्नवाचक चिन्ह (?) के स्थान पर क्या आएगा, यदि '+' और '-' को परस्पर बदल दिया जाए तथा 'x' और '÷' को परस्पर बदल दिया जाए?

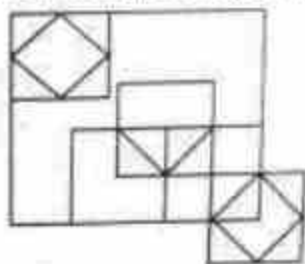
What will come in the place of the question mark (?) in the following equation. If '+' and '-' are interchanged and 'x' and '÷' are interchanged?

$$162 \times 9 - 452 + 7 \div 9 = ?$$

- a) 507
b) 407
c) 607
d) 707
33. छह संख्याएँ 1, 3, 5, 6, 7 और 8 पासे (dice) के विभिन्न फलकों पर लिखी गई हैं। इस पासे की दो स्थितियाँ चित्र में दिखाई गई हैं। उस फलक पर कौन-सी संख्या होगी जो 6 वाली संख्या के विपरीत है?
- Six numbers 1, 3, 5, 6, 7 and 8 are written on different faces of a dice. Two positions of this dice are shown in the figure. Which is the number on the face opposite to the face containing 6?



- a) 8
b) 7
c) 5
d) 3
34. दिए गए चित्र में कितने त्रिभुज हैं?
- How many triangles are there in the given figure?



- a) 11
b) 15
c) 13
d) 14
35. 35 विद्यार्थी एक पंक्ति में बैठे हैं। करण बाएँ से 9वें स्थान पर है और अर्जुन दाएँ से 15वें स्थान पर है। करण और अर्जुन के बीच कितने विद्यार्थी हैं?

35 students are arranged in a row. Karan is 9th from left and Arjun is 15th from right. Find the number of students between Karan and Arjun.

- a) 10
b) 11
c) 12
d) 13

36. नवरात्रि के दौरान, प्रिया 30 दिए को एक पंक्ति में सजाती है। सोने का दिया बाएँ से 8वाँ है और चाँदी का दिया दाएँ से 10वाँ है। उनके बीच कितने दिए हैं?

During Navratri, Priya arranges 30 diyas in a row. A golden diya is 8th from the left, and a silver diya is 10th from the right. How many diyas are between them?

- a) 11
b) 15
c) 13
d) 12

37. कुछ अक्षर दिए गए हैं जिनके बाद प्रश्नवाचक चिन्ह (?) है। ये अक्षर एक विशेष क्रम का पालन कर रहे हैं। आपको सही विकल्प देना है जो प्रश्नवाचक चिन्ह के स्थान पर आ सके।

Few of the letters are given followed by a question mark (?) these letters are following a specific pattern you have to give the correct option which can replace question mark.

D, H, M, S, ?

- a) Z
b) A
c) B
d) C

38. उस अगले अगले अंक को बताइये जो प्रश्नवाचक चिन्ह (?) के स्थान पर तार्किक रूप से आएगा।

Find the next element that logically fits in place of the question mark (?)

24, 61, 122, 213, ?

- a) 341
b) 340
c) 330
d) 359

39. उस अगले अगले अंक को बताइये जो प्रश्नवाचक चिन्ह (?) के स्थान पर तार्किक रूप से आएगा।

Find the next element that logically fits in place of the question mark (?)

10, 24, 52, 108, ?

- a) 220
b) 226
c) 214
d) 233

40. यदि दी गई शीट को मोड़कर घन (cube) बनाया जाए, तो '≠' चिन्ह के विपरीत फलक पर कौन-सा चिन्ह होगा?

What would be the symbol on the opposite side of '≠' if the given sheet is folded to form a cube?

%	μ
	∞
	¥
π	≠

- a) μ
b) %
c) ∞
d) ¥

41. यदि दी गई शीट को मोड़कर घन (cube) बनाया जाए, तो 'Y' अक्षर के विपरीत फलक पर कौन-सा अक्षर होगा? What would be the letter on the opposite side of 'Y' if the given sheet is folded to form a cube?

Z	
U	
Y	V
	X
	W

- a) W
b) Z
c) X
d) V

42. दिए गए क्रम में प्रश्नवाचक चिन्ह (?) के स्थान पर क्या आना चाहिए? What should come in place of the question mark (?) in the given series?

40, ?, 18, 10, 4, 0

- a) 30
b) 28
c) 25
d) 22

43. दिए गए चित्र में कुल कितने त्रिभुज हैं? What is the total number of triangles in the given figure?



- a) 6
b) 8
c) 10
d) 12

44. किन दो संकेतन (चिन्हों) को परस्पर बदलने पर यह समीकरण सही होगा? By interchanging which two signs the equation will be correct?

$$15 + 5 \div 2 - 9 \times 3 = 22$$

- a) + and -
b) × and ÷

c) \times and +d) \div and +

45. निम्नलिखित प्रश्न में, दिए गए विकल्पों में से असंगत अक्षर/अक्षरों का चयन कीजिए। In the following question, select the odd letter/ letters from the given alternatives.

a) VWYB

b) LMOR

c) QSVY

d) ABDG

46. पैटर्न को ध्यानपूर्वक अध्ययन कीजिए और उस संख्या का चयन कीजिए जो प्रश्नवाचक चिन्ह (?) के स्थान पर आ सकती है। Study the pattern carefully and select the number that can replace the question mark (?) in it.

14	42	84
28	84	168
19	57	?

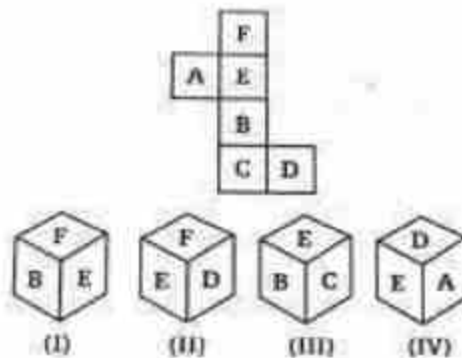
a) 129

b) 126

c) 114

d) 112

47. यदि नीचे दिखाई गई शीट को मोड़कर घन (cube) बनाया जाए, तो कौन-सा घन बनेगा? Which cube will be formed if the sheet shown below is folded?



a) Only I

b) Only II

c) I and III

d) I, II, III and IV

48. यदि '+' का अर्थ '-', ' \times ' का अर्थ '+', '-' का अर्थ ' \div ' और ' \div ' का अर्थ ' \times ' हो, तो दिए गए समीकरण में प्रश्नवाचक चिन्ह (?) के स्थान पर क्या आएगा? If '+' means '-', ' \times ' means '+', '-' means ' \div ' and ' \div ' means ' \times ', then what will come in place of '?' in the given expression?

$$72 \times 19 \div 13 + 16 - ? \div 15 \times 7 = 266$$

a) 32

b) 16

c) 4

d) 2

49. निम्नलिखित में से कौन-सा अक्षर दिए गए क्रम में प्रश्नवाचक चिन्ह (?) के स्थान पर आएगा?
Which of the following letter will replace the question mark (?) in the given series?

L, N, P, R, T, V, ?

- a) X
c) V

- b) F
d) N

50. दिए गए दो संकेतन (\times और \div) को परस्पर बदलने के बाद, दिए गए समीकरण का मान क्या होगा? After interchanging the given two signs, what will be the value of the given equation?

\times and \div

$$47 + 13 \div 65 \times 5 - 16$$

- a) 195
c) 205

- b) 190
d) 200

General Awareness

51. अशोक के सभी स्तंभ लेखों में सबसे लंबा कौन-सा है?

Among all the pillar edicts of Ashoka, which one is the longest one?

- a) 7वाँ स्तंभ लेख / 7th pillar edict
c) 5वाँ स्तंभ लेख / 5th pillar edict

- b) 6वाँ स्तंभ लेख / 6th pillar edict
d) 3वाँ स्तंभ लेख / 3th pillar edict

52. निम्नलिखित में से कौन-सा पारंपरिक ऊर्जा स्रोत है? Which of these is a conventional source of energy?

- a) भू-तापीय / Geothermal
c) सौर / Solar

- b) कोयला / Coal
d) पवन / Wind

53. निम्नलिखित में से कौन-सा अखाद्य तिलहन है? / Which of these is a non-edible oilseed?

- a) तिल / Sesame
c) अलसी / Linseed

- b) सूरजमुखी / Sunflower
d) मूँगफली / Groundnut

54. 2026-27 के केंद्रीय बजट में कृषि-स्टैक पोर्टलों को एकीकृत करने के लिए प्रस्तावित बहुभाषी कृत्रिम बुद्धिमत्ता (AI) उपकरण का नाम क्या है?

What is the name of the multilingual Artificial Intelligence (AI) tool proposed in Union Budget 2026-27 to integrate AgriStack portals?

- a) एग्री-एआई प्लेटफ़ॉर्म / Agri-AI Platform
 b) भारत-कृषि / Bharat-KRISHI
 c) फ़ार्मएआई / FarmAI
 d) भारत-विस्तार / Bharat-VISTAAR

55. भारत में अलग 'वरिष्ठ नागरिक बजट' घोषित करने वाला पहला राज्य कौन-सा है?
 Which state has become the first in India to announce a separate 'Elderly Budget'?

- a) केरल / Kerala
 b) महाराष्ट्र / Maharashtra
 c) तमिलनाडु / Tamil Nadu
 d) ओडिशा / Odisha

56. अग्नि-III मध्यम दूरी की बैलिस्टिक मिसाइल किस संगठन द्वारा विकसित की गई है?
 Agni-III intermediate-range ballistic missile is developed by which organization?

- a) भारतीय अंतरिक्ष अनुसंधान संगठन / Indian Space Research Organisation
 b) भारत डायनेमिक्स लिमिटेड / Bharat Dynamics Limited
 c) हिंदुस्तान एयरोनॉटिक्स लिमिटेड / Hindustan Aeronautics Limited
 d) रक्षा अनुसंधान एवं विकास संगठन / Defence Research and Development Organisation

57. दलमा वन्यजीव अभयारण्य किस राज्य में स्थित है? / Dalma Wildlife Sanctuary is located in which state?

- a) झारखंड / Jharkhand
 b) गुजरात / Gujarat
 c) राजस्थान / Rajasthan
 d) ओडिशा / Odisha

58. भारत का पहला राष्ट्रीय 'गौ संस्कृति संग्रहालय' उत्तर प्रदेश के किस शहर में स्थापित किया गया है?

India's first National Cow Culture Museum has been established in which city of Uttar Pradesh?

- a) वाराणसी/ Varanasi
 b) मथुरा/ Mathura
 c) गोरखपुर/ Gorakhpur
 d) अयोध्या/ Ayodhya

59. एशियाई खेल 2026 की मेज़बानी कौन-सा देश करेगा? Which country is the host of Asian Games 2026?

- a) जापान/ Japan
 b) भारत/ India
 c) इंडोनेशिया/ Indonesia
 d) चीन/ China

60. राष्ट्रीय जैव विविधता प्राधिकरण किस अधिनियम के अंतर्गत स्थापित किया गया था? / The National Biodiversity Authority was established under which Act?
- a) पर्यावरण संरक्षण अधिनियम, 1986 / Environment Protection Act, 1986
 b) वन्यजीव संरक्षण अधिनियम, 1972 / Wildlife Protection Act, 1972
 c) जैव विविधता अधिनियम, 2002 / Biological Diversity Act, 2002
 d) वन संरक्षण अधिनियम, 1980 / Forest Conservation Act, 1980
61. गुरजंत सिंह, जिन्होंने मार्च 2026 में अपनी सेवानिवृत्ति की घोषणा की, किस खेल से जुड़े हैं?
 Gurjant Singh, who recently announced his retirement in March 2026, is associated with which sport?
- a) फुटबॉल/ Football
 b) हॉकी/ Hockey
 c) मुक्केबाज़ी/ Boxing
 d) बैडमिंटन/ Badminton
62. SHe-Box पोर्टल किस मंत्रालय द्वारा शुरू किया गया था? / The SHe-Box Portal was launched by which ministry?
- a) गृह मंत्रालय / Ministry of Home Affairs
 b) श्रम एवं रोजगार मंत्रालय / Ministry of Labour and Employment
 c) महिला एवं बाल विकास मंत्रालय / Ministry of Women and Child Development
 d) विधि एवं न्याय मंत्रालय / Ministry of Law and Justice
63. भारत का पहला प्रोटोटाइप फास्ट ब्रीडर रिएक्टर (PFBR) किस राज्य में स्थित है? / India's first Prototype Fast Breeder Reactor (PFBR) is located in which state?
- a) तमिलनाडु / Tamil Nadu
 b) कर्नाटक / Karnataka
 c) केरल / Kerala
 d) आंध्र प्रदेश / Andhra Pradesh
64. अंतर्राष्ट्रीय परमाणु ऊर्जा एजेंसी (IAEA) का मुख्यालय कहाँ स्थित है? / Where is the headquarters of International Atomic Energy Agency (IAEA) located?
- a) न्यूयॉर्क / New York
 b) वियना / Vienna
 c) लंदन / London
 d) जेनेवा / Geneva
65. झारखंड राष्ट्रीय आंदोलन में प्रसिद्ध भाई कौन थे? / Who were the famous brothers in the Jharkhand National Movement?

- a) सुरजू भगत और लालू भगत / Surju Bhagat and Lalu Bhagat
- b) तिलका मांझी और बिरसा मुंडा / Tilka Manjhi and Birsa Munda
- c) सिद्धू मुर्मू और कान्हू मुर्मू / Siddhu Murmu and Kanhu Murmu
- d) जात्रा उराँव और राम मांझी / Jatra Oraon and Ram Manjhi

66. झारखंड में छठ पूजा किस देवता की आराधना के लिए की जाती है? / Chhath Puja in Jharkhand is dedicated to worship which deity?

- a) चंद्रमा / Moon
- b) नदी देवता / River deity
- c) सूर्य / Sun
- d) वन देवता / Forest deity

67. निम्नलिखित में से कौन-सी रबी फ़सलें हैं? / Which of the following are Rabi crops?

- a) ज्वार और बाजरा / Jowar and Bajra
- b) सरसों और रेपसीड / Rapeseed and Mustard
- c) खरबूजा और लौकी / Muskmelon and Gourd
- d) मक्का और गन्ना / Maize and Sugarcane

68. भारत के निम्नलिखित केंद्र शासित प्रदेशों में से किसका क्षेत्रफल सबसे बड़ा है? / Which among the following Union Territory of India has the largest area?

- a) दिल्ली / Delhi
- b) अंडमान और निकोबार द्वीपसमूह / Andaman & Nicobar Islands
- c) दादरा और नगर हवेली / Dadra & Nagar Haveli
- d) लद्दाख / Ladakh

69. राम का पुल या रामसेतु निम्नलिखित में से किस जलसंधि में स्थित है? / Rama's Bridge or Rama Setu is located in which among the following straits?

- a) बेरिंग जलसंधि / Bering Strait
- b) पाल्क जलसंधि / Palk Strait
- c) कुक जलसंधि / Cook Strait
- d) तेबराउ जलसंधि / Strait of Tebrau

70. भारत की सबसे पुरानी पर्वत श्रृंखला कौन-सी है? / Which of the following is the oldest mountain range in India?

- a) हिमालय / Himalayas
- b) नीलगिरि / Nilgiri
- c) विंध्य / Vindhya
- d) अरावली / Aravalli

77. निम्नलिखित में से कौन-सा सूक्ष्मजीव पोलियो और चिकनपॉक्स जैसी बीमारियाँ उत्पन्न करता है? / Which of the following micro-organism causes diseases like polio and chicken pox?
- a) प्रोटोज़ोआ / Protozoa b) बैक्टीरिया / Bacteria
c) विषाणु / Virus d) शैवाल / Algae
78. दालें किस कुल (Family) से प्राप्त होती हैं? / Pulses are obtained from the family of ____
- a) लिलीएसी / Liliaceae b) फुंगी / Fungi
c) साइकाडेसी / Cycadaceae d) लेग्यूमिनोसी / Leguminosae
79. स्वराज पार्टी निम्नलिखित में से किस घटना का परिणाम थी? / Swaraj party was outcome of which among the following incidents?
- a) चौरी चौरा / Chauri Chaura b) भारत छोड़ो आंदोलन / Quit India Movement
c) साइमन कमीशन का आगमन / Arrival of Simon Commission d) बारडोली सत्याग्रह / Bardoli Satyagraha
80. भारतीय पुनर्जागरण के जनक किसे कहा जाता है? / Who is known as the 'Father of Indian Renaissance'?
- a) विक्रम साराभाई / Vikram Sara Bhai b) राजा राम मोहन राय / Raja Ram Mohan Roy
c) राम गोपाल वर्मा / Ram Gopal Verma d) लाला लाजपत राय / Lala Lajpat Rai
81. भारत में 'राष्ट्रीय विज्ञान दिवस' 28 फरवरी को मनाया जाता है। यह किस वैज्ञानिक की उपलब्धि को चिह्नित करता है?
In India, 'National Science Day' is celebrated on February 28 to mark the achievement of which scientist?
- a) सी. वी. रमन/ C. V. Raman b) होमी जे. भाभा/ Homi J. Bhabha
c) विक्रम साराभाई/ Vikram Sarabhai d) ए. पी. जे. अब्दुल कलाम/ A. P. J. Abdul Kalam
82. निम्नलिखित में से कौन भारतीय अंतरिक्ष अनुसंधान संगठन (ISRO) के पहले अध्यक्ष थे?
Who among the following was the first chairman of the Indian Space Research Organisation?
- a) विक्रम साराभाई/ Vikram Sarabhai b) एम. जी. के. मेनन/ M.G. K. Menon

- c) सतीश धवन/ Satish Dhawan d) होमी जे. भाभा/ Homi J. Bhabha

83. Gemini AI मॉडल किस कंपनी द्वारा विकसित किया गया था?

Which company developed the Gemini AI model?

- a) एप्पल/ Apple b) अमेज़न/ Amazon
c) गूगल/ Google d) आईबीएम/ IBM

84. भारतीय राज्य विधान सभा चुनाव में मतदान करने की न्यूनतम आयु कितनी है?

What is the minimum age to vote in the State Legislative Elections in India?

- a) 16 वर्ष/ 16 years b) 18 वर्ष/ 18 years
c) 21 वर्ष/ 21 years d) 25 वर्ष/ 25 years

85. आर्य समाज के संस्थापक कौन थे? Who was the founder of Arya Samaj?

- a) रवीन्द्रनाथ टैगोर/ Rabindranath Tagore b) स्वामी विवेकानंद/ Swami Vivekananda
c) केशव चंद्र सेन/ Keshub Chandra Sen d) दयानंद सरस्वती/ Dayanand Saraswati

86. भटियाली लोक संगीत, जिसे प्रायः मछुआरे गाते हैं, किस राज्य से संबंधित है?

With which of the following states is the Bhatiali folk music, which is mostly sung by the fishermen, associated?

- a) केरल/ Kerala b) आंध्र प्रदेश/ Andhra Pradesh
c) पश्चिम बंगाल/ West Bengal d) ओडिशा/ Odisha

87. 'बृहत् कथा कोश' (Brihat Katha Kosh) के लेखक निम्नलिखित में से कौन थे?

Who among the following was the author of 'Brihat Katha Kosh'?

- a) क्षेमेन्द्र / Kshemendra b) हरिसेन / Harisen
c) दंडिन/ Dandin d) भवभूति / Bhavabhuti

88. भारत ने एशियाई खेलों की मेज़बानी पहली बार किस वर्ष की थी?

In which year has India hosted the Asian Games for the first time?

- a) 1951 b) 1949
c) 1948 d) 1950

89. भारतीय संविधान के किस भाग में मौलिक अधिकारों की छह व्यापक श्रेणियाँ दी गई हैं?

In which part of the Constitution will you find the six broad categories of Fundamental Rights?

- a) I b) III

c) II

d) IV

90. भारत में वित्तीय वर्ष 1 अप्रैल से शुरू होता है और को समाप्त होता है। The financial year in India starts from 1st April and ends on

a) 31 जुलाई/ 31st Julyb) 30 जून/ 30th Junec) 31 मई/ 31st Mayd) 31 मार्च/ 31st March

91. अखिल भारतीय मुस्लिम लीग की स्थापना किस वर्ष हुई थी?

All India Muslim League was founded in the year?

a) 1905

b) 1904

c) 1926

d) 1906

92. सविनय अवज्ञा आंदोलन (Civil Disobedience Movement) की शुरुआत कब हुई थी?

The civil disobedience movement was started in...

a) 1942

b) 1914

c) 1928

d) 1930

93. अजंता और एलोरा गुफाएँ भारत के किस राज्य में स्थित हैं?

Ajanta and Ellora caves are located in which state of India?

a) मध्य प्रदेश/ Madhya Pradesh

b) बिहार/ Bihar

c) महाराष्ट्र/ Maharashtra

d) गोवा/ Goa

94. गिरनार पहाड़ियाँ कहाँ स्थित हैं?

Where are the Girnar hills located?

a) मध्य प्रदेश/ Madhya Pradesh

b) गुजरात/ Gujarat

c) महाराष्ट्र/ Maharashtra

d) गोवा/ Goa

95. निम्नलिखित में से कौन-सा लोकनृत्य झारखंड राज्य की जनजातियों से संबंधित है?

Which of the following folk dances belongs to the tribes of the Jharkhand state?

a) हुट्टरी नृत्य/ Huttari Dance

b) नाटी नृत्य/ Nati Dance

c) मुंडारी नृत्य/ Mundari Dance

d) भवई नृत्य/ Bhavai Dance

96. 'सत्यमेव जयते' शब्द किससे लिया गया है?

The word 'Satyameva Jayate' is taken from?

a) यजुर्वेद/ Yajur Veda

b) अथर्ववेद/ Atharva Veda

c) मुण्डक उपनिषद/ Mundaka Upanishad

d) पुराण/ Puranas

97. मानव शरीर में सबसे कठोर ऊतक कौन-सा है?

..... is/ are the hardest tissue(s) in the human body.

- | | |
|------------------------------------|--------------------------------|
| a) एपिडर्मिस/ Epidermis | b) उपास्थि/ Cartilage |
| c) अस्थि पेशियाँ/ Skeletal Muscles | d) दाँत का इनेमल/ Tooth Enamel |

98. न्यूट्रॉन की खोज किसने की थी?

Who among the following discovered the neutrons?

- | | |
|----------------------------|---|
| a) जे. चैडविक/ J. Chadwick | b) ई. गोल्डस्टीन/ E. Goldstein |
| c) नील्स बोहर/ Neil Bohr | d) अर्नेस्ट रदरफोर्ड/ Ernest Rutherford |

99. महात्मा गांधी ने किसानों के समर्थन में गुजरात के खेड़ा ज़िले में सत्याग्रह किस वर्ष आयोजित किया था?

In which year Mahatma Gandhi organised a satyagraha in the Kheda district of Gujarat in the support of peasants?

- | | |
|---------|---------|
| a) 1916 | b) 1920 |
| c) 1919 | d) 1918 |

100. मिज़ोरम की राजधानी क्या है? What is the capital of Mizoram?

- | | |
|--------------------|----------------------|
| a) कोहिमा / Kohima | b) शिलांग / Shillong |
| c) आइज़ोल / Aizawl | d) इम्फाल / Imphal |

English Language and comprehension:

In each of the following questions (101-105), out of the four alternatives, choose the word with the correct spelling.

101. Choose the word with the correct spelling

- | | |
|--------------|--------------|
| a) Oxidieser | b) Thespian |
| c) Aproval | d) Secreetes |

102. Choose the word with the correct spelling

- | | |
|-------------|--------------|
| a) Litigate | b) Diatrybe |
| c) Cloystre | d) Griemiest |

103. Choose the word with the correct spelling

- | | |
|------------|-------------|
| a) Humable | b) Customer |
| c) Breches | d) Boufant |

104. Choose the word with the correct spelling
- | | |
|-------------|--------------|
| a) Mariaage | b) Marryiage |
| c) Marrage | d) Marriage |

105. Choose the word with the correct spelling
- | | |
|----------------|----------------|
| a) Inumerable | b) Innumarable |
| c) Innumereble | d) Innumerable |

In each of the following questions (106-110), out of the four alternatives, choose the word which is spelt wrongly.

106. Choose the word which is spelt wrongly.
- | | |
|----------------|------------|
| a) Conceit | b) Dungaon |
| c) Dismissible | d) Distil |

107. Choose the word which is spelt wrongly.
- | | |
|---------------|--------------|
| a) Beginer | b) Besiege |
| c) Perishable | d) Privilege |

108. Choose the word which is spelt wrongly.
- | | |
|----------------|-------------|
| a) Stigma | b) Recovery |
| c) Anticipiate | d) Crockery |

109. Choose the word which is spelt wrongly.
- | | |
|---------------|--------------|
| a) Beautisian | b) Bilingual |
| c) Barbarian | d) Ballon |

110. Choose the word which is spelt wrongly.
- | | |
|---------------|-------------|
| a) Gorgeous | b) Granduer |
| c) Gratuitous | d) Glutton |

In each of the following questions (111-120), out of the four alternatives, select the alternatives which best expresses the meaning of the idiom/phrase.

111. Turn a blind eye
- | | |
|--------------------------------------|-------------------------------------|
| a) Not able to see the obvious truth | b) Hide the ugly truth from someone |
| c) Pretend not to notice | d) Stay away from bad habits |

112. Easy come, easy go
- a) If you forcibly tie up a person in a relationship that person will run away
 - b) No matter what, one should never lose temper
 - c) Every task is easy for a talented person
 - d) Something acquired without effort may be lost without regret
113. Down memory lane
- a) Pleasant memories
 - b) Unpleasant thoughts
 - c) Road to sadness
 - d) Comical situation
114. New kid on the block
- a) New rules which are bound to fail
 - b) A junior
 - c) A new social trend
 - d) A newcomer
115. Get into a soup
- a) To make things difficult
 - b) To be worrisome
 - c) To be familiar of
 - d) To get an advantage
116. High and Low
- a) Everywhere
 - b) Optimism
 - c) Hypocrisy
 - d) Experience
117. Ended in a fiasco
- a) A complete failure
 - b) A successful event
 - c) Changed one completely
 - d) Twisted around
118. To judge a book by its cover
- a) To rely on outward appearance
 - b) To buy books after seeing the colourful cover
 - c) To read the outer cover only
 - d) To go with popular opinions
119. Rome was not built in a day
- a) It takes time to create great things
 - b) You have to win many wars to build an empire
 - c) A task done hurriedly fails completely
 - d) Building anything worth while requires skill

120. Pandora's box
- a) Arguments for and against
 - b) To act dubiously
 - c) Popular
 - d) A prolific source of trouble

In each of the following questions (121-130), out of the four alternatives, choose the one which can substitute in the given word(s)/sentence.

121. Capable of being read clearly
- a) Illegible
 - b) Legitimate
 - c) Legible
 - d) Readings
122. Something chosen as a symbol to bring good luck
- a) Charm
 - b) Mascot
 - c) Luck toy
 - d) Totem
123. The first model of a new device.
- a) Prototype
 - b) Sculpture
 - c) Icon
 - d) Photograph
124. A person learning a trade under someone
- a) Assistant
 - b) Secretary
 - c) Clerk
 - d) Apprentice
125. That which is unlawful
- a) Legal
 - b) Court
 - c) Bail
 - d) Illicit
126. One whose wife is dead
- a) Bachelor
 - b) Spinster
 - c) Widower
 - d) Widow
127. Overturn in water
- a) Drown
 - b) Swim
 - c) Wreck
 - d) Capsize
128. Free from punishment
- a) Posterity
 - b) Stoicism
 - c) Impunity
 - d) Wath

129. Easily duped or fooled
- | | |
|-------------|--------------|
| a) Bigot | b) Gullible |
| c) Ridicule | d) Venerable |

130. Fluent and clear in speech
- | | |
|---------------|-----------------|
| a) Emotional | b) Enthusiastic |
| c) Articulate | d) Confident |

In each of the following questions (131-135), a part of the sentence is printed in bold. Below are given alternatives to the bold part at (a), (b) and (c) which may improve the sentence. Choose the correct alternative.

131. The hill is too high **for climbing**.
- | | |
|--------------------|-------------------|
| a) to climb | b) for going up |
| c) for climbing up | d) No improvement |
132. I can always **count on him** in times of difficulty.
- | | |
|-----------------|-------------------|
| a) count him on | b) count on he |
| c) count at him | d) No improvement |
133. There are **schools in either sides** of the road.
- | | |
|---------------------------|--------------------------|
| a) schools on either side | b) school on either side |
| c) school on either sides | d) No improvement |
134. We **acted your** instructions
- | | |
|--------------------|--------------------|
| a) acted upon your | b) acted your very |
| c) acted over your | d) No improvement |
135. Sapnaa has just **gone to** her family in Mumbai.
- | | |
|------------|-------------------|
| a) visited | b) found |
| c) joined | d) No improvement |

In each of the following questions (136-138), a sentence has been given in Active/Passive voice. Out of four alternatives suggested, select the one which best expresses the same sentence in Passive/Active voice.

136. I had to stop all my work to complete this project.
- | | |
|--|---|
| a) All other work has to be stopped to complete this project by me | b) For completing this project all other work must be stopped |
|--|---|

- c) For completing this project I had to stop all my work
- d) To complete this project all other work had been stopped by me

137. Who teaches you English?

- a) By whom were you taught English?
- b) By whom are you taught English?
- c) English is taught by whom?
- d) By whom will you be taught English?

138. We hope that we shall win the match.

- a) The match is hoped to be won.
- b) Match winning is our hope.
- c) It is hoped that the match will be won by us.
- d) Winning the match is hoped by us.

In each of the following questions (139-140), a sentence has been given in Direct/Indirect speech. Out of four alternatives suggested, select the one, which best expresses the same sentence in Direct/Indirect speech.

139. "What did you say", she said.

- a) She said what I said
- b) She asked me what I had said
- c) She told me what I said
- d) She spoke about what I said

140. She asked me not to go to Chennai

- a) She told me, "Don't go to Chennai"
- b) She is telling me, "Don't go to Chennai"
- c) She was telling me, "Don't go to Chennai"
- d) She told me, "Go to Chennai"

In each of the following questions (141-145), rearrange the parts of the sentence in correct order

141. Aggregate levels of under nutrition in India

P. remain shockingly high; despite the impressive

Q. stunting in the last decade

R. reduction in

- a) PRQ
- b) QPR
- c) RPQ
- d) QRP

146. a) stronger
c) inclined
- b) asymmetric
d) strange
147. a) onslaughts
c) world
- b) attack
d) intrusions
148. a) down as
c) up on
- b) down for
d) up in
149. a) the two
c) either
- b) both
d) neither
150. a) more stronger
c) strengthened
- b) strongest
d) strengthening

Directions (151-155): In the following passage, some of the words have been left out. Read the passage carefully and select the correct answer for the given numbered blank out of the four alternatives.

Our Constitution is named **(151)**, because it is in the hands not of the **(152)** but of the many. But our laws secure equal **(153)** for all in their private disputes and our public opinion welcomes and **(154)** talents in every branch of achievement. And as we give free play to **(155)** in our public life, so we carry the same spirit into our daily relation with one another.

- 151 a) democracy
c) plutocracy
- b) aristocracy
d) theocracy
- 152 a) liberals
c) few
- b) little
a) people
- 153 a) remuneration
c) rights
- b) justice
d) power

- 154 a) humiliate
c) negotiate
- b) judge
d) honours
- 155 a) some
c) few
- b) all
d) little

Directions (156-160): Read the following passage carefully and choose the most appropriate answer to each question out of the four alternatives.

The savings of certain wild animals from extinction has for many years been a problem for zoologists and other specialists, but more recently the problem has become so acute, and has received so much publicity, that most people are now concerned about it. This may at first seem strange because one of the most gratifying developments of the last few years has been the passing of strict laws to protect wild animals and the consequent decline in the hunting of big-game for sport. Why is it, then that some rare wild animals are still threatened with extinction and even some of the less ones are rapidly declining in number?

One reason is the 'march of civilization'. When an area is wholly cleared of vegetation to make room for new towns, factory sites or hydroelectric plant the natural home of several species is destroyed. The displaced animal must either migrate to another area or perish. Even the clearing of land for a road or an airfield may involve 'pushing back' the jungle and the smaller the area in which wild animals compete for a living, the smaller the number that can hope to survive.

156. According to the author what is referred to 'this may at first seem strange'?
- a) The problem of saving certain wild animals
c) The clearing vegetation
- b) The hunting of big-game
d) The extinction of animals
157. What is meant by 'pushing back the jungle'?
- a) To move jungle away
b) To compete for a living

- c) Clearing of vegetation to make towns and factory sites d) Removing the jungle
158. What has the passing of strict laws resulted in?
a) A problem for zoologists b) The decline of big-game hunting for sport
c) Smaller locations for towns d) Wiping out wild animals in smaller number
159. What is the main reason for an area to be wholly cleared?
a) The march of civilization b) To make rooms for rare animals
c) To grow trees d) To reduce the area of the jungle
160. The meaning of the word 'gratifying' is
a) resulting b) reducing
c) pleasing d) declining

Directions (161-165): Read the following passage carefully and choose the most appropriate answer to each question out of the four alternatives.

Today perhaps your only association with the word 'polio' is the Sabin Oral Vaccine that protects children from the disease, sixty-five years' ago, this was not so. The dreaded disease, which mainly affects the brain and the spinal cord, causes stiffening and weakening of the muscles, crippling and paralysis- which is why I am in a wheel-chair today. If somebody had predicted, when I was born, that this would happen to me, no one would have believed it. I was the seventh child in a family of four pairs of brothers and sister, with a huge 23- year gap between the first and the last. I was told that, unlike the others, I was so fair and brown-haired that I looked more like a foreigner than a Dawood Bohri. I was also considered to be the healthiest of the brood.

161. In this passage, the word "brood" refers to
a) Polio victims b) Foreign children
c) Children in the family d) Indian children
162. In his childhood, the narrator looked "more like a foreigner than a Dawood Bohri". This was because he was

- a) A foreign child
c) Tall and smart
- b) A very healthy boy
d) Fair and brown-haired
163. In his childhood, the narrator was
- a) A weakling
c) Tall and slim
- b) Very healthy
d) Short and stout
164. The narrator was the seventh child in a family of
- a) 8 children
c) 10 children
- b) 16 children
d) 4 children
165. In this passage, the narrator is a patient of
- a) Heart disease
c) Paralysis
- b) Polio
d) Nervous weakness
166. Use the appropriate article for the sentence given below.
Platinum is _____ valuable metal.
- a) a
c) an
- b) the
d) No article
167. Choose the correct preposition from the given options to complete the sentence.
I will think _____ the matter.
- a) for
c) about
- b) on
d) at
168. He is very brainy. That is, he is very _____. Complete the sentence
- a) dull
c) unintelligent
- b) big headed
d) intelligent
169. Fill in the blank using the right preposition.
I was _____ 10 Downing Street today.
- a) into
c) at
- b) in
d) on
170. Past participle of "Sow" is
- a) sew
c) sowed
- b) sown
d) sewn

188. Advance
a) Bend
b) Give
c) Change
d) Move forward
189. Subsidy
a) Endowment
b) Forfeit
c) Mulct
d) Reward
190. Exactly
a) Different
b) Precisely
c) Similar
d) Same

In each of the following questions (191-200), out of the four alternatives, choose the one which best expresses the **antonym/ opposite in meaning** to the given word:

191. Dilate
a) Terminate
b) Compress
c) Expand
d) Weaken
192. Mysterious
a) Complicated
b) Bright
c) Evident
d) Puzzle
193. Creation
a) Death
b) Destruction
c) Formation
d) Sublimation
194. Expect
a) Regret
b) Loathe
c) Despair
d) Attend
195. Secret
a) Covert
b) Overt
c) Unseen
d) Sociable
196. Dearth
a) Poverty
b) Foreign
c) Lack
d) Abundance

197. Famous
a) Obscure
c) Poor
b) Boring
d) Untalented
198. Supercilious
a) Humble
c) Relevant
b) Unimportant
d) Serious
199. Conceal
a) Announce
c) State
b) Declare
d) Reveal
200. Amusement
a) Mischief
c) Melancholy
b) Naughty
d) Hilarity

Use For Rough Work

Use For Rough Work

Use For Rough Work

General Intelligence & Reasoning

- 'K' ने 5 मीटर उत्तर दिशा में चला। फिर वह बाएँ मुड़ा और 10 मीटर चला। उसके बाद वह दाएँ मुड़ा और 20 मीटर चला। फिर वह फिर से दाएँ मुड़ा और 10 मीटर चला। तो वह प्रारंभिक बिंदु से कितनी दूरी पर है?

'K' walked 5 metres towards North, then he took a left turn and walked for 10 metres. He then took a right turn and walked for 20 metres, and again took right turn and walked 10 metres. How far he is from the starting point?

a) 20 मीटर metres	b) 15 मीटर metres
c) 25 मीटर metres	d) 30 मीटर metres
- कला का घर, माला के घर के ठीक सामने है। कला उत्तर-पूर्व दिशा में जाकर माला के घर पहुँचती है। यदि माला को कला के घर जाना हो, तो उसे किस दिशा में जाना चाहिए?

Kala's house is just opposite to Mala's house. Kala goes towards North- East and reaches Mala's house. If Mala has to go to Kala's house then in which direction should Mala go?

a) दक्षिण-पश्चिम/ South-West	b) उत्तर-पश्चिम/ North-West
c) उत्तर-पूर्व/ North-East	d) दक्षिण-पूर्व/ South-East
- लता पश्चिम दिशा में 20 मीटर चलती है और फिर बाएँ मुड़कर 10 मीटर चलती है। अब हर बार दाएँ मुड़ते हुए वह क्रमशः 10 मीटर, 20 मीटर और 30 मीटर चलती है। तो वह अपने प्रारंभिक बिंदु से कितनी दूरी पर है?

Latha walks 20m in west and then 10 m to the left. Now every Time turning to her right, she walks 10 m, 20 m and 30 m respectively. How far is she now from her starting point?

a) 30 मीटर m	b) 10 मीटर m
c) 20 मीटर m	d) 40 मीटर m
- M, K का भाई है। P, K की बहन है। R, P का पिता है। K और R का क्या सम्बन्ध है है?

M is brother of K. P is sister of K. R is father of P. How is K related to R?

a) पुत्र/ Son	b) पुत्री/ Daughter
c) पुत्र या पुत्री/ Son or Daughter	d) डेटा अपर्याप्त/ Data inadequate
- A, B का भाई है। C, A की बहन है। D, L का भाई है। L, B की बेटी है। तो D का चाचा कौन है?

A is the brother of B. C is the Sister of A. D is the brother of L. L is the daughter of B, then who is the uncle of D?

- a) B
c) A
- b) C
d) डेटा अपर्याप्त है Data inadequate

6. आज शुक्रवार है। 62 दिनों बाद कौन-सा दिन होगा?

Today is Friday. After 62 days, it will be

- a) शनिवार/ Saturday
c) मंगलवार/ Tuesday
- b) सोमवार/ Monday
d) गुरुवार/ Thursday

7. किसी शताब्दी का अंतिम दिन कभी नहीं हो सकता है

The last day of a century cannot be

- a) सोमवार/ Monday
c) शुक्रवार/ Friday
- b) बुधवार/ Wednesday
d) मंगलवार/ Tuesday

8. भारत का पहला गणतंत्र दिवस 26 जनवरी 1950 को मनाया गया था। यह था—

The first Republic Day of India was celebrated on 26th January, 1950. It was

- a) मंगलवार/ Tuesday
c) गुरुवार/ Thursday
- b) बुधवार/ Wednesday
d) शुक्रवार/ Friday

9. घड़ी में समय 4:30 है। यदि मिनट की सुई दक्षिण दिशा की ओर इशारा कर रही है, तो घंटे की सुई किस दिशा की ओर इशारा करेगी?

The time on the watch is 4:30. If the minute hand points towards south, the hour hand will point towards?

- a) दक्षिण-पूर्व / South-East
c) उत्तर-पश्चिम/ North West
- b) पश्चिम / West
d) पूर्व / East

10. घड़ी की घंटे की सुई 10 मिनट में कितने अंश (डिग्री) घूमती है?

How many degrees does an hour-hand move in 10 minutes?

- a) 10°
c) 5°
- b) 20°
d) 15°

11. एक निश्चित सांकेतिक भाषा में, BEAM को 2349 और MEAN को 4327 के रूप में लिखा गया है। उस भाषा में N का कोड क्या होगा?

In a certain code language, BEAM is coded as 2349 and MEAN is coded as 4327. What is the code for N in that language?

- a) 2
c) 7
- b) 4
d) 3

- a) YB
c) YV
- b) BX
d) BB

17. मोटर : काइल :: ? / Motor : Coil :: ?

- a) मेज़ : कुर्सी / Table : Chair
c) पहिया : कार / Wheel : Car
- b) रेजिमेंट : सैनिक / Regiment : Soldier
d) पहिया : बेयरिंग / Wheel : Bearing

18. EAGLE : FCJPJ :: CRAWL : ?

- a) DTDBR
c) DTDAQ
- b) DTFCR
d) DTEZQ

19. 4 : 19 :: 7 : ?

- a) 28
c) 68
- b) 52
d) 49

20. पंखा : पंख :: पहिया : ? / Fan : Wings :: Wheel : ?

- a) गाड़ियाँ / Cars
c) तीलियाँ / Spokes
- b) हवा / Air
d) गोल / Round

21. उस अक्षर-संयोजन का चयन कीजिए, जिसे दिए गए क्रम में रिक्त स्थानों पर क्रमवार रखने से वह क्रम तार्किक रूप से पूर्ण हो जाएगा।

Select the combination of letters that when sequentially placed in the blanks of the given series will logically complete the series.

A _ A _ C A B _ B _ A _ _ B C A B A _ C

- a) BABACBA
c) BBACABB
- b) BBABBCB
d) BBACBAB

22. निम्नलिखित समीकरण में प्रश्नवाचक चिन्ह (?) के स्थान पर क्या आएगा, यदि '+' और '-' को परस्पर बदल दिया जाए तथा 'x' और '÷' को परस्पर बदल दिया जाए?

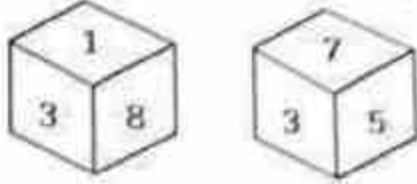
What will come in the place of the question mark (?) in the following equation. If '+' and '-' are interchanged and 'x' and '÷' are interchanged?

$$162 \times 9 - 452 + 7 \div 9 = ?$$

- a) 507
c) 607
- b) 407
d) 707

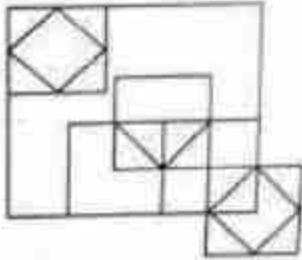
23. छह संख्याएँ 1, 3, 5, 6, 7 और 8 पासे (dice) के विभिन्न फलकों पर लिखी गई हैं। इस पासे की दो स्थितियाँ चित्र में दिखाई गई हैं। उस फलक पर कौन-सी संख्या होगी जो 6 वाली संख्या के विपरीत है?

Six numbers 1, 3, 5, 6, 7 and 8 are written on different faces of a dice. Two positions of this dice are shown in the figure. Which is the number on the face opposite to the face containing 6?



- a) 8
b) 7
c) 5
d) 3

24. दिए गए चित्र में कितने त्रिभुज हैं? How many triangles are there in the given figure?



- a) 11
b) 15
c) 13
d) 14
25. 35 विद्यार्थी एक पंक्ति में बैठे हैं। करण बाएँ से 9वें स्थान पर है और अर्जुन दाएँ से 15वें स्थान पर है। करण और अर्जुन के बीच कितने विद्यार्थी हैं?

35 students are arranged in a row. Karan is 9th from left and Arjun is 15th from right. Find the number of students between Karan and Arjun.

- a) 10
b) 11
c) 12
d) 13

26. नवरात्रि के दौरान, प्रिया 30 दिए को एक पंक्ति में सजाती है। सोने का दिया बाएँ से 8वाँ है और चाँदी का दिया दाएँ से 10वाँ है। उनके बीच कितने दिए हैं?

During Navratri, Priya arranges 30 diyas in a row. A golden diya is 8th from the left, and a silver diya is 10th from the right. How many diyas are between them?

- a) 11
b) 15
c) 13
d) 12

27. कुछ अक्षर दिए गए हैं जिनके बाद प्रश्नवाचक चिन्ह (?) है। ये अक्षर एक विशेष क्रम का पालन कर रहे हैं। आपको सही विकल्प देना है जो प्रश्नवाचक चिन्ह के स्थान पर आ सके।
Few of the letters are given followed by a question mark (?) these letters are following a specific pattern you have to give the correct option which can replace question mark.

D, H, M, S, ?

- a) Z
c) B

- b) A
d) C

28. उस अगले अगले अंक को बताइये जो प्रश्नवाचक चिन्ह (?) के स्थान पर तार्किक रूप से आएगा।

Find the next element that logically fits in place of the question mark (?)

24, 61, 122, 213, ?

- a) 341
c) 330

- b) 340
d) 359

29. उस अगले अगले अंक को बताइये जो प्रश्नवाचक चिन्ह (?) के स्थान पर तार्किक रूप से आएगा।

Find the next element that logically fits in place of the question mark (?)

10, 24, 52, 108, ?

- a) 220
c) 214

- b) 226
d) 233

30. यदि दी गई शीट को मोड़कर घन (cube) बनाया जाए, तो '≠' चिन्ह के विपरीत फलक पर कौन-सा चिन्ह होगा?

What would be the symbol on the opposite side of '≠' if the given sheet is folded to form a cube?

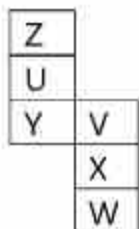
%	μ
	∞
	¥
π	≠

- a) μ
c) ∞

- b) %
d) ¥

31. यदि दी गई शीट को मोड़कर घन (cube) बनाया जाए, तो 'Y' अक्षर के विपरीत फलक पर कौन-सा अक्षर होगा?

What would be the letter on the opposite side of 'Y' if the given sheet is folded to form a cube?



- a) W
c) X

- b) Z
d) V

32. दिए गए क्रम में प्रश्नवाचक चिन्ह (?) के स्थान पर क्या आना चाहिए? What should come in place of the question mark (?) in the given series?

40, ?, 18, 10, 4, 0

- a) 30
c) 25

- b) 28
d) 22

33. दिए गए चित्र में कुल कितने त्रिभुज हैं? What is the total number of triangles in the given figure?



- a) 6
c) 10

- b) 8
d) 12

34. किन दो संकेतन (चिन्हों) को परस्पर बदलने पर यह समीकरण सही होगा? By interchanging which two signs the equation will be correct?

$$15 + 5 \div 2 - 9 \times 3 = 22$$

- a) + and -
c) \times and +

- b) \times and \div
d) \div and +

35. निम्नलिखित प्रश्न में, दिए गए विकल्पों में से असंगत अक्षर/अक्षरों का चयन कीजिए। In the following question, select the odd letter/ letters from the given alternatives.

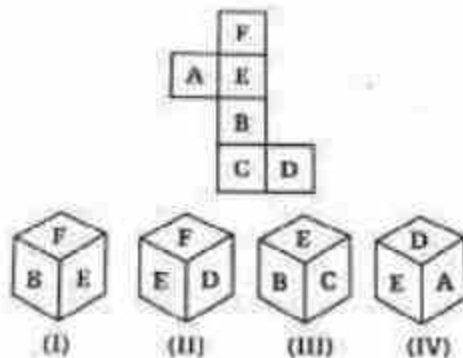
- a) VWYB
c) QSVY

- b) LMOR
d) ABDG

36. पैटर्न को ध्यानपूर्वक अध्ययन कीजिए और उस संख्या का चयन कीजिए जो प्रश्नवाचक चिन्ह (?) के स्थान पर आ सकती है। Study the pattern carefully and select the number that can replace the question mark (?) in it.

14	42	84
28	84	168
19	57	?

- a) 129
b) 126
c) 114
d) 112
37. यदि नीचे दिखाई गई शीट को मोड़कर घन (cube) बनाया जाए, तो कौन-सा घन बनेगा? Which cube will be formed if the sheet shown below is folded?



- a) Only I
b) Only II
c) I and III
d) I, II, III and IV
38. यदि '+' का अर्थ '-', 'x' का अर्थ '+', '-' का अर्थ '÷' और '÷' का अर्थ 'x' हो, तो दिए गए समीकरण में प्रश्नवाचक चिन्ह (?) के स्थान पर क्या आएगा? If '+' means '-', 'x' means '+', '-' means '÷' and '÷' means 'x', then what will come in place of '?' in the given expression?
 $72 \times 19 \div 13 + 16 - ? \div 15 \times 7 = 266$
- a) 32
b) 16
c) 4
d) 2
39. निम्नलिखित में से कौन-सा अक्षर दिए गए क्रम में प्रश्नवाचक चिन्ह (?) के स्थान पर आएगा? Which of the following letter will replace the question mark (?) in the given series?
L, N, P, R, T, V, ?
- a) X
b) F
c) V
d) N

40. दिए गए दो संकेतन (\times और \div) को परस्पर बदलने के बाद, दिए गए समीकरण का मान क्या होगा? After interchanging the given two signs, what will be the value of the given equation?

\times and \div

$$47 + 13 \div 65 \times 5 - 16$$


a) 195

b) 190

c) 205

d) 200

41. दिए गए चित्र में कितने चतुर्भुज (quadrilaterals) हैं? How many quadrilaterals are there in the given figure?



a) 22

b) 26

c) 24

d) 23

42. S, T की बहन है। R, S का भाई है। U, W की पत्नी है। T, U का पिता है। तो T का W से क्या संबंध है? S is the sister of T. R is the brother of S. U is the wife of W. T is the father of U. How is T related to W?

a) ससुर/ Father-in-law

b) पुत्र/ Son

c) पिता / Father

d) मामा / Maternal Uncle

43. निम्नलिखित प्रश्न में, दिए गए विकल्पों में से असंगत अक्षर/अक्षरों का चयन कीजिए। In the following question, select the odd letter/ letters from the given alternatives.

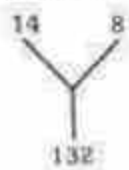
a) LMNO

b) IJKL

c) ABCD

d) BDEF

44. प्रश्नवाचक चिन्ह (?) का मान पता कीजिये। Find the value of the question mark (?)



a) 104

b) 200

c) 180

d) 125

45. प्रश्नवाचक चिन्ह (?) का मान पता कीजिये | Find the value of the question mark (?)

7	8	11
9	5	9
11	3	6
8	6	?

- a) 12
b) 14
c) 16
d) 20

46. प्रश्नवाचक चिन्ह (?) का मान पता कीजिये | Find the value of the question mark (?)

8	7	11
64	49	121
48	35	?

- a) 144
b) 99
c) 50
d) 89

47. P, Q, R और S कैरम खेल रहे हैं। P, R और S, Q साथी हैं। R पश्चिम की ओर देख रहा है और S, R के दाहिने ओर बैठा है। तो Q किस दिशा में देख रहा है?

P, Q, R and S are playing carrom. P, R and S, Q are partners, S is sitting to the right of R who faces west, then Q faces which direction?

- a) दक्षिण / South
b) पूर्व / East
c) पश्चिम / West
d) उत्तर / North

48. पाँच लड़कियाँ E, F, G, H और I एक पंक्ति में उत्तर दिशा की ओर मुख करके खड़ी हैं। H, G के दाहिने ओर है। I, G के बाएँ ओर है, लेकिन F के दाहिने ओर है। H, E के बाएँ ओर है। तो सबसे दाहिने छोर पर कौन खड़ी है?

Five girls E, F, G, H and I are standing in a row facing north. H is on the right of G. I is on the left of G, but is on the right of F. H is on the left of E. Who is standing on the extreme right?

- a) E
b) F
c) G
d) H

49. पाँच मित्र Rajan, Roshan, Rupesh, Ranjit और Randhir एक पंक्ति में उत्तर दिशा की ओर मुख करके खड़े हैं। Randhir, Rajan के बाएँ ओर है और Roshan, Rupesh के

दाहिने ओर है। यदि Roshan, Ranjit और Rupesh के बीच में है, तो Ranjit के बाएँ ओर कौन है?

Five friends Rajan, Roshan, Rupesh, Ranjit and Randhir are standing in a line facing north. Randhir is to the left of Rajan and Roshan is to the right of Rupesh. If Roshan is between Ranjit and Rupesh, who is to the left of Ranjit?

- a) राजन / Rajan
b) रूपेश / Rupesh
c) रोशन / Roshan
d) रंधीर / Randhir

50. पाँच गाँव हैं – P, Q, R, S और T। गाँव Q, P के पूर्व में और गाँव S के दक्षिण में है। गाँव R, गाँव T के पश्चिम में है, जो P के उत्तर में है। तो गाँव S, P के सापेक्ष किस दिशा में है?

There are five villages, namely P, Q, R, S and T. Village Q is to the east of P and to the south of village S. Village R is to the west of village T, which is to the north of village P. In which direction is village S with respect to village P?

- a) दक्षिण-पश्चिम / South- west
b) उत्तर-पश्चिम/ North- west
c) उत्तर/ North
d) उत्तर-पूर्व / North-east

General Awareness

51. गुरजंत सिंह, जिन्होंने मार्च 2026 में अपनी सेवानिवृत्ति की घोषणा की, किस खेल से जुड़े हैं?

Gurjant Singh, who recently announced his retirement in March 2026, is associated with which sport?

- a) फुटबॉल/ Football
b) हॉकी/ Hockey
c) मुक्केबाज़ी/ Boxing
d) बैडमिंटन/ Badminton

52. SHe-Box पोर्टल किस मंत्रालय द्वारा शुरू किया गया था? / The SHe-Box Portal was launched by which ministry?

- a) गृह मंत्रालय / Ministry of Home Affairs
b) श्रम एवं रोजगार मंत्रालय / Ministry of Labour and Employment
c) महिला एवं बाल विकास मंत्रालय / Ministry of Women and Child Development
d) विधि एवं न्याय मंत्रालय / Ministry of Law and Justice

53. भारत का पहला प्रोटोटाइप फास्ट ब्रीडर रिएक्टर (PFBR) किस राज्य में स्थित है? / India's first Prototype Fast Breeder Reactor (PFBR) is located in which state?

- a) तमिलनाडु / Tamil Nadu
 c) केरल / Kerala
- b) कर्नाटक / Karnataka
 d) आंध्र प्रदेश / Andhra Pradesh

54. अंतर्राष्ट्रीय परमाणु ऊर्जा एजेंसी (IAEA) का मुख्यालय कहाँ स्थित है? / Where is the headquarters of International Atomic Energy Agency (IAEA) located?

- a) न्यूयॉर्क / New York
 c) लंदन / London
- b) वियना / Vienna
 d) जेनेवा / Geneva

55. झारखंड राष्ट्रीय आंदोलन में प्रसिद्ध भाई कौन थे? / Who were the famous brothers in the Jharkhand National Movement?

- a) सुरजू भगत और लालू भगत /
Surju Bhagat and Lalu
Bhagat
- b) तिलका मांझी और बिरसा मुंडा /
Tilka Manjhi and Birsa
Munda
- c) सिद्धू मुर्मू और कान्हू मुर्मू /
Siddhu Murmu and Kanhu
Murmu
- d) जात्रा उराँव और राम मांझी / Jatra
Oraon and Ram Manjhi

56. झारखंड में छठ पूजा किस देवता की आराधना के लिए की जाती है? / Chhath Puja in Jharkhand is dedicated to worship which deity?

- a) चंद्रमा / Moon
 c) सूर्य / Sun
- b) नदी देवता / River deity
 d) वन देवता / Forest deity

57. निम्नलिखित में से कौन-सी रबी फ़सलें हैं? / Which of the following are Rabi crops?

- a) ज्वार और बाजरा / Jowar and
Bajra
- b) सरसों और रेपसीड / Rapeseed
and Mustard
- c) खरबूजा और लौकी /
Muskmelon and Gourd
- d) मक्का और गन्ना / Maize and
Sugarcane

58. भारत के निम्नलिखित केंद्र शासित प्रदेशों में से किसका क्षेत्रफल सबसे बड़ा है? / Which among the following Union Territory of India has the largest area?

- a) दिल्ली / Delhi
- b) अंडमान और निकोबार द्वीपसमूह
/ Andaman & Nicobar
Islands
- c) दादरा और नगर हवेली / Dadra
& Nagar Haveli
- d) लद्दाख / Ladakh

59. राम का पुल या रामसेतु निम्नलिखित में से किस जलसंधि में स्थित है? / Rama's Bridge or Rama Setu is located in which among the following straits?

- a) बेरिंग जलसंधि / Bering Strait
- b) पाल्क जलसंधि / Palk Strait

- c) कुक जलसंधि / Cook Strait d) तेबराउ जलसंधि / Strait of Tebrau
60. भारत की सबसे पुरानी पर्वत श्रृंखला कौन-सी है? / Which of the following is the oldest mountain range in India?
 a) हिमालय / Himalayas b) नीलगिरि / Nilgiri
 c) विंध्य / Vindhya d) अरावली / Aravalli
61. निम्नलिखित में से किस प्रकार की मिट्टी को सामान्यतः 'सेल्फ मल्टिंग साइल' कहा जाता है? / Which of the following type of soils is commonly known as 'self-mulching soil'?
 a) काली मिट्टी / Black soil b) भूरी मिट्टी / Brown soil
 c) लाल मिट्टी / Red soil d) धूसर मिट्टी / Grey soil
62. भारत का सबसे बड़ा तेल क्षेत्र (Oilfield) निम्नलिखित में से कौन-सा है? / Which of the following is the largest oil field in India?
 a) बॉम्बे हाई ऑयलफील्ड / Bombay High Oilfield b) अंकलेश्वर ऑयलफील्ड / Ankleswar Oilfield
 c) नाहरकटिया ऑयलफील्ड / Naharkatia Oilfield d) डिगबोई ऑयलफील्ड / Digboi Oilfield
63. नरोरा परमाणु ऊर्जा स्टेशन भारत के किस स्थान पर स्थित है? / Narora Atomic Power Station is situated in which of the following places of India?
 a) गुजरात / Gujarat b) उत्तर प्रदेश / Uttar Pradesh
 c) कर्नाटक / Karnataka d) महाराष्ट्र / Maharashtra
64. भारत में अनेक कोयला क्षेत्र किस घाटी में पाए जाते हैं? / In India, there are many coal fields found in ...
 a) गंगा घाटी / Ganga Valley b) कावेरी घाटी / Kaveri Valley
 c) कृष्णा घाटी / Krishna Valley d) दामोदर घाटी / Damodar Valley
65. भारत का सबसे ऊँचा पर्वत शिखर कौन-सा है? / The highest peak in India is ____
 a) कामेत / Kamet b) नंदाकोट / Nandakot
 c) नंदा देवी / Nanda Devi d) के२ (गॉडविन ऑस्टिन) / K2 (Godwin Austen)
66. 2011 क्रिकेट विश्व कप, जिसमें भारत ने अपना दूसरा विश्व कप खिताब जीता, में 'प्लेयर ऑफ द सीरीज़' कौन थे? / Who was the "player of the series" in the 2011

Cricket World Cup, in which India won its second world cup champion title?

- | | |
|---|--|
| a) तिलकरत्ने दिलशान /
Tillakaratne Dilshan | b) सचिन तेंदुलकर / Sachin
Tendulkar |
| c) कुमार संगकारा / Kumar
Sangakkara | d) युवराज सिंह / Yuvraj Singh |

67. निम्नलिखित में से कौन-सा सूक्ष्मजीव पोलियो और चिकनपॉक्स जैसी बीमारियाँ उत्पन्न करता है? / Which of the following micro-organism causes diseases like polio and chicken pox?

- | | |
|--------------------------|--------------------------|
| a) प्रोटोज़ोआ / Protozoa | b) बैक्टीरिया / Bacteria |
| c) विषाणु / Virus | d) शैवाल / Algae |

68. दालें किस कुल (Family) से प्राप्त होती हैं? / Pulses are obtained from the family of ___

- | | |
|---------------------------|-------------------------------|
| a) लिलीएसी / Liliaceae | b) फुंगी / Fungi |
| c) साइकाडेसी / Cycadaceae | d) लेग्यूमिनोसी / Leguminosae |

69. स्वराज पार्टी निम्नलिखित में से किस घटना का परिणाम थी? / Swaraj party was outcome of which among the following incidents?

- | | |
|---|---|
| a) चौरी चौरा / Chauri Chaura | b) भारत छोड़ो आंदोलन / Quit
India Movement |
| c) साइमन कमीशन का आगमन /
Arrival of Simon Commission | d) बारडोली सत्याग्रह / Bardoli
Satyagraha |

70. भारतीय पुनर्जागरण के जनक किसे कहा जाता है? / Who is known as the 'Father of Indian Renaissance'?

- | | |
|---|--|
| a) विक्रम साराभाई / Vikram Sara
Bhai | b) राजा राम मोहन राय / Raja Ram
Mohan Roy |
| c) राम गोपाल वर्मा / Ram Gopal
Verma | d) लाला लाजपत राय / Lala Lajpat
Rai |

71. भारत में 'राष्ट्रीय विज्ञान दिवस' 28 फरवरी को मनाया जाता है। यह किस वैज्ञानिक की उपलब्धि को चिह्नित करता है?

In India, 'National Science Day' is celebrated on February 28 to mark the achievement of which scientist?

- | | |
|--|---|
| a) सी. वी. रमन / C. V. Raman | b) होमी जे. भाभा / Homi J. Bhabha |
| c) विक्रम साराभाई / Vikram
Sarabhai | d) ए. पी. जे. अब्दुल कलाम / A. P. J.
Abdul Kalam |

72. निम्नलिखित में से कौन भारतीय अंतरिक्ष अनुसंधान संगठन (ISRO) के पहले अध्यक्ष थे?
Who among the following was the first chairman of the Indian Space Research Organisation?
- a) विक्रम साराभाई/ Vikram Sarabhai
b) एम. जी. के. मेनन/ M.G. K. Menon
c) सतीश धवन/ Satish Dhawan
d) होमी जे. भाभा/ Homi J. Bhabha
73. Gemini AI मॉडल किस कंपनी द्वारा विकसित किया गया था?
Which company developed the Gemini AI model?
- a) एप्पल/ Apple
b) अमेज़न/ Amazon
c) गूगल/ Google
d) आईबीएम/ IBM
74. भारतीय राज्य विधान सभा चुनाव में मतदान करने की न्यूनतम आयु कितनी है?
What is the minimum age to vote in the State Legislative Elections in India?
- a) 16 वर्ष/ 16 years
b) 18 वर्ष/ 18 years
c) 21 वर्ष/ 21 years
d) 25 वर्ष/ 25 years
75. आर्य समाज के संस्थापक कौन थे? Who was the founder of Arya Samaj?
- a) रवीन्द्रनाथ टैगोर/ Rabindranath Tagore
b) स्वामी विवेकानंद/ Swami Vivekananda
c) केशव चंद्र सेन/ Keshub Chandra Sen
d) दयानंद सरस्वती/ Dayanand Saraswati
76. भटियाली लोक संगीत, जिसे प्रायः मछुआरे गाते हैं, किस राज्य से संबंधित है?
With which of the following states is the Bhatiali folk music, which is mostly sung by the fishermen, associated?
- a) केरल/ Kerala
b) आंध्र प्रदेश/ Andhra Pradesh
c) पश्चिम बंगाल/ West Bengal
d) ओडिशा/ Odisha
77. 'बृहत् कथा कोश' (Brihat Katha Kosh) के लेखक निम्नलिखित में से कौन थे?
Who among the following was the author of 'Brihat Katha Kosh'?
- a) क्षेमेन्द्र / Kshemendra
b) हरिसेन / Harisen
c) दंडिन/ Dandin
d) भवभूति / Bhavabhuti
78. भारत ने एशियाई खेलों की मेज़बानी पहली बार किस वर्ष की थी?
In which year has India hosted the Asian Games for the first time?
- a) 1951
b) 1949
c) 1948
d) 1950

The word 'Satyameva Jayate' is taken from?

- | | |
|-------------------------------------|---------------------------|
| a) यजुर्वेद/ Yajur Veda | b) अथर्ववेद/ Atharva Veda |
| c) मुण्डक उपनिषद/ Mundaka Upanishad | d) पुराण/ Puranas |

87. मानव शरीर में सबसे कठोर ऊतक कौन-सा है?

..... is/ are the hardest tissue(s) in the human body.

- | | |
|------------------------------------|--------------------------------|
| a) एपिडर्मिस/ Epidermis | b) उपास्थि/ Cartilage |
| c) अस्थि पेशियाँ/ Skeletal Muscles | d) दाँत का इनेमल/ Tooth Enamel |

88. न्यूट्रॉन की खोज किसने की थी?

Who among the following discovered the neutrons?

- | | |
|----------------------------|---|
| a) जे. चैडविक/ J. Chadwick | b) ई. गोल्डस्टीन/ E. Goldstein |
| c) नील्स बोहर/ Neil Bohr | d) अर्नेस्ट रदरफोर्ड/ Ernest Rutherford |

89. महात्मा गांधी ने किसानों के समर्थन में गुजरात के खेड़ा ज़िले में सत्याग्रह किस वर्ष आयोजित किया था?

In which year Mahatma Gandhi organised a satyagraha in the Kheda district of Gujarat in the support of peasants?

- | | |
|---------|---------|
| a) 1916 | b) 1920 |
| c) 1919 | d) 1918 |

90. मिज़ोरम की राजधानी क्या है? What is the capital of Mizoram?

- | | |
|--------------------|----------------------|
| a) कोहिमा / Kohima | b) शिलांग / Shillong |
| c) आइज़ोल / Aizawl | d) इम्फाल / Imphal |

91. अशोक के सभी स्तंभ लेखों में सबसे लंबा कौन-सा है?

Among all the pillar edicts of Ashoka, which one is the longest one?

- | | |
|--------------------------------------|--------------------------------------|
| a) 7वाँ स्तंभ लेख / 7th pillar edict | b) 6वाँ स्तंभ लेख / 6th pillar edict |
| c) 5वाँ स्तंभ लेख / 5th pillar edict | d) 3वाँ स्तंभ लेख / 3th pillar edict |

92. निम्नलिखित में से कौन-सा पारंपरिक ऊर्जा स्रोत है? Which of these is a conventional source of energy?

- | | |
|--------------------------|-----------------|
| a) भू-तापीय / Geothermal | b) कोयला / Coal |
| c) सौर / Solar | d) पवन / Wind |

India's first National Cow Culture Museum has been established in which city of Uttar Pradesh?

- a) वाराणसी/ Varanasi b) मथुरा/ Mathura
c) गोरखपुर/ Gorakhpur d) अयोध्या/ Ayodhya

99. एशियाई खेल 2026 की मेज़बानी कौन-सा देश करेगा? Which country is the host of Asian Games 2026?

- a) जापान/ Japan b) भारत/ India
c) इंडोनेशिया/ Indonesia d) चीन/ China

100. राष्ट्रीय जैव विविधता प्राधिकरण किस अधिनियम के अंतर्गत स्थापित किया गया था? / The National Biodiversity Authority was established under which Act?

- a) पर्यावरण संरक्षण अधिनियम, 1986 / Environment Protection Act, 1986 b) वन्यजीव संरक्षण अधिनियम, 1972 / Wildlife Protection Act, 1972
c) जैव विविधता अधिनियम, 2002 / Biological Diversity Act, 2002 d) वन संरक्षण अधिनियम, 1980 / Forest Conservation Act, 1980

English Language and comprehension:

In each of the following questions (101-110), out of the four alternatives, select the alternatives which best expresses the meaning of the idiom/phrase.

101. Turn a blind eye

- a) Not able to see the obvious truth b) Hide the ugly truth from someone
c) Pretend not to notice d) Stay away from bad habits

102. Easy come, easy go

- a) If you forcibly tie up a person in a relationship that person will run away b) No matter what, one should never lose temper
c) Every task is easy for a talented person d) Something acquired without effort may be lost without regret

103. Down memory lane

- a) Pleasant memories b) Unpleasant thoughts

- c) Road to sadness
d) Comical situation
104. New kid on the block
a) New rules which are bound to fail
b) A junior
c) A new social trend
d) A newcomer
105. Get into a soup
a) To make things difficult
b) To be worrisome
c) To be familiar of
d) To get an advantage
106. High and Low
a) Everywhere
b) Optimism
c) Hypocrisy
d) Experience
107. Ended in a fiasco
a) A complete failure
b) A successful event
c) Changed one completely
d) Twisted around
108. To judge a book by its cover
a) To rely on outward appearance
b) To buy books after seeing the colourful cover
c) To read the outer cover only
d) To go with popular opinions
109. Rome was not built in a day
a) It takes time to create great things
b) You have to win many wars to build an empire
c) A task done hurriedly fails completely
d) Building anything worth while requires skill
110. Pandora's box
a) Arguments for and against
b) To act dubiously
c) Popular
d) A prolific source of trouble

In each of the following questions (111-120), out of the four alternatives, choose the one which can substitute in the given word(s)/sentence.

111. Capable of being read clearly
a) Illegible
b) Legitimate

In each of the following questions (121-125), a part of the sentence is printed in bold. Below are given alternatives to the bold part at (a), (b) and (c) which may improve the sentence. Choose the correct alternative.

121. The hill is too high **for climbing**.
- a) to climb
b) for going up
c) for climbing up
d) No improvement
122. I can always **count on him** in times of difficulty.
- a) count him on
b) count on he
c) count at him
d) No improvement
123. There are **schools in either sides** of the road.
- a) schools on either side
b) school on either side
c) school on either sides
d) No improvement
124. We **acted your** instructions
- a) acted upon your
b) acted your very
c) acted over your
d) No improvement
125. Sapnaa has just **gone to** her family in Mumbai.
- a) visited
b) found
c) joined
d) No improvement

In each of the following questions (126-128), a sentence has been given in Active/Passive voice. Out of four alternatives suggested, select the one which best expresses the same sentence in Passive/Active voice.

126. I had to stop all my work to complete this project.
- a) All other work has to be stopped to complete this project by me
b) For completing this project all other work must be stopped
c) For completing this project I had to stop all my work
d) To complete this project all other work had been stopped by me
127. Who teaches you English?
- a) By whom were you taught English?
b) By whom are you taught English?
c) English is taught by whom?
d) By whom will you be taught English?

128. We hope that we shall win the match.

- | | |
|--|--------------------------------------|
| a) The match is hoped to be won. | b) Match winning is our hope. |
| c) It is hoped that the match will be won by us. | d) Winning the match is hoped by us. |

In each of the following questions (129-130), a sentence has been given in Direct/Indirect speech. Out of four alternatives suggested, select the one, which best expresses the same sentence in Direct/Indirect speech.

129. "What did you say", she said.

- | | |
|----------------------------|---------------------------------|
| a) She said what I said | b) She asked me what I had said |
| c) She told me what I said | d) She spoke about what I said |

130. She asked me not to go to Chennai

- | | |
|--|---|
| a) She told me, "Don't go to Chennai" | b) She is telling me, "Don't go to Chennai" |
| c) She was telling me, "Don't go to Chennai" | d) She told me, "Go to Chennai" |

In each of the following questions (131-135), rearrange the parts of the sentence in correct order

131. Aggregate levels of under nutrition in India

- P. remain shockingly high; despite the impressive
Q. stunting in the last decade
R. reduction in

- | | |
|--------|--------|
| a) PRQ | b) QPR |
| c) RPQ | d) QRP |

132. Ironically, in spite of a decline in poverty,

- P. the proportion of
Q. the population receiving welfare
R. benefits has risen sharply

- | | |
|--------|--------|
| a) QRP | b) PQR |
| c) RPQ | d) QPR |

133. There was a second part

P. are ambivalent about

Q. many people

R. of her decision which

a) QRP

b) QPR

c) PRQ

d) RQP

134. This alone

P. should alert us to what

Q. is actually about

R. the demand for a Uniform Civil Code

a) PRQ

b) PQR

c) QPR

d) RPQ

135. It is not uncommon

P. to push for public expenditure

Q. at a time

R. when private investment sentiment is weak

a) QRP

b) PQR

c) RPQ

d) QPR

Directions (136-140): In the following passage, some of the words have been left out. Read the passage carefully and select the correct answer for the given numbered blank out of the four alternatives.

The battle between attackers and the attacked is becoming still more **(136)**. Faced with potentially new cyber **(137)**, the danger to India's economic and national security is going **(138)** geometrical progression. To be forearmed, with **(139)** offensive cyber operations and **(140)** cyber security, is essential.

136. a) stronger

b) asymmetric

c) inclined

d) strange

137. a) onslaughts

b) attack

c) world

d) intrusions

Directions (146-150): Read the following passage carefully and choose the most appropriate answer to each question out of the four alternatives.

The savings of certain wild animals from extinction has for many years been a problem for zoologists and other specialists, but more recently the problem has become so acute, and has received so much publicity, that most people are now concerned about it. This may at first seem strange because one of the most gratifying developments of the last few years has been the passing of strict laws to protect wild animals and the consequent decline in the hunting of big-game for sport. Why is it, then that some rare wild animals are still threatened with extinction and even some of the less ones are rapidly declining in number?

One reason is the 'march of civilization'. When an area is wholly cleared of vegetation to make room for new towns, factory sites or hydroelectric plant the natural home of several species is destroyed. The displaced animal must either migrate to another area or perish. Even the clearing of land for a road or an airfield may involve 'pushing back' the jungle and the smaller the area in which wild animals compete for a living, the smaller the number that can hope to survive.

146. According to the author what is referred to 'this may at first seem strange'?
- | | |
|---|------------------------------|
| a) The problem of saving certain wild animals | b) The hunting of big-game |
| c) The clearing vegetation | d) The extinction of animals |
147. What is meant by 'pushing back the jungle'?
- | | |
|---|----------------------------|
| a) To move jungle away | b) To compete for a living |
| c) Clearing of vegetation to make towns and factory sites | d) Removing the jungle |
148. What has the passing of strict laws resulted in?
- | | |
|--------------------------------|--|
| a) A problem for zoologists | b) The decline of big-game hunting for sport |
| c) Smaller locations for towns | d) Wiping out wild animals in smaller number |

149. What is the main reason for an area to be wholly cleared?
- a) The march of civilization
 - b) To make rooms for rare animals
 - c) To grow trees
 - d) To reduce the area of the jungle
150. The meaning of the word 'gratifying' is
- a) resulting
 - b) reducing
 - c) pleasing
 - d) declining

Directions (151-155): Read the following passage carefully and choose the most appropriate answer to each question out of the four alternatives.

Today perhaps your only association with the word 'polio' is the Sabin Oral Vaccine that protects children from the disease, sixty-five years' ago, this was not so. The dreaded disease, which mainly affects the brain and the spinal cord, causes stiffening and weakening of the muscles, crippling and paralysis- which is why I am in a wheel-chair today. If somebody had predicted, when I was born, that this would happen to me, no one would have believed it. I was the seventh child in a family of four pairs of brothers and sister, with a huge 23- year gap between the first and the last. I was told that, unlike the others, I was so fair and brown-haired that I looked more like a foreigner than a Dawood Bohri. I was also considered to the healthiest of the brood.

151. In this passage, the word "brood" refers to
- a) Polio victims
 - b) Foreign children
 - c) Children in the family
 - d) Indian children
152. In his childhood, the narrator looked "more like a foreigner than a Dawood Bohri". This was because he was
- a) A foreign child
 - b) A very healthy boy
 - c) Tall and smart
 - d) Fair and brown-haired
153. In his childhood, the narrator was
- a) A weakling
 - b) Very healthy
 - c) Tall and slim
 - d) Short and stout
154. The narrator was the seventh child in a family of
- a) 8 children
 - b) 16 children

c) (C)

d) (D)

163. All the furniture (A)/ have been (B)/ sent to the new house (C)/ No error (D)

a) (A)

b) (B)

c) (C)

d) (D)

164. The large ballons (A)/ I bought for Christmas (B)/ is very nice (C)/ No error (D)

a) (A)

b) (B)

c) (C)

d) (D)

165. Yesterday after (A)/ the train stopped (B)/ I went home on taxi along with my assistant. (C)/ No error(D)

a) (A)

b) (B)

c) (C)

d) (D)

In each of the following questions (166-170), a sentence is given with blank to be filled in with an appropriate word. Select the correct alternative out of the four.

166. He cannot dissociate himself _____ what he said earlier.

a) With

b) Of

c) Off

d) from

167. There is a lovely _____ of the hills from the window.

a) Sight

b) look

c) view

d) impression

168. I could not _____ what he wanted to say.

a) make over

b) make out

c) make

d) make in

169. The captain of the unit _____ the soldiers to follow him.

a) Warned

b) asked

c) recommended

d) ordered

170. Mr. Sachin runs _____ than Kapil.

a) Faster

b) fastest

c) more fast

d) fast

In each of the following questions (171-180), out of the four alternatives, choose the one which best expresses the **meaning** to the given word:

171. Crooked

- a) Twisted
- b) Straight
- c) Offspring
- d) Harmonious

172. Genre

- a) Celebrity
- b) Common man
- c) Category
- d) Pleasant

173. Development

- a) Enrich
- b) Evolution
- c) Amplify
- d) Promotion

174. Gluttony

- a) Greed
- b) Giant
- c) Enormous
- d) Stomach

175. Revamp

- a) Retreat
- b) Repeat
- c) Restructure
- d) Retrial

176. Recollect

- a) Return
- b) Remember
- c) Unite
- d) Assemble

177. Grave

- a) Dead
- b) Still
- c) Serious
- d) Sad

178. Advance

- a) Bend
- b) Give
- c) Change
- d) Move forward

179. Subsidy

- a) Endowment
- b) Forfeit
- c) Mulct
- d) Reward

180. Exactly
- a) Different
 - b) Precisely
 - c) Similar
 - d) Same

In each of the following questions (181-190), out of the four alternatives, choose the one which best expresses the **antonym/ opposite in meaning** to the given word:

181. Dilate
- a) Terminate
 - b) Compress
 - c) Expand
 - d) Weaken
182. Mysterious
- a) Complicated
 - b) Bright
 - c) Evident
 - d) Puzzle
183. Creation
- a) Death
 - b) Destruction
 - c) Formation
 - d) Sublimation
184. Expect
- a) Regret
 - b) Loathe
 - c) Despair
 - d) Attend
185. Secret
- a) Covert
 - b) Overt
 - c) Unseen
 - d) Sociable
186. Dearth
- a) Poverty
 - b) Foreign
 - c) Lack
 - d) Abundance
187. Famous
- a) Obscure
 - b) Boring
 - c) Poor
 - d) Untalented
188. Supercilious
- a) Humble
 - b) Unimportant
 - c) Relevant
 - d) Serious

189. Conceal
- | | |
|-------------|------------|
| a) Announce | b) Declare |
| c) State | d) Reveal |

190. Amusement
- | | |
|---------------|-------------|
| a) Mischief | b) Naughty |
| c) Melancholy | d) Hilarity |

In each of the following questions (191-195), out of the four alternatives, choose the word with the correct spelling.

191. Choose the word with the correct spelling
- | | |
|--------------|--------------|
| a) Oxidieser | b) Thespian |
| c) Aproval | d) Secreetes |

192. Choose the word with the correct spelling
- | | |
|-------------|--------------|
| a) Litigate | b) Diatrybe |
| c) Cloystre | d) Griemiest |

193. Choose the word with the correct spelling
- | | |
|------------|-------------|
| a) Humable | b) Customer |
| c) Breches | d) Boufant |

194. Choose the word with the correct spelling
- | | |
|-------------|--------------|
| a) Mariaage | b) Marryiage |
| c) Marrage | d) Marriage |

195. Choose the word with the correct spelling
- | | |
|----------------|----------------|
| a) Innumerable | b) Innumarable |
| c) Innumereble | d) Innumerable |

In each of the following questions (196-200), out of the four alternatives, choose the word which is spelt wrongly.

196. Choose the word which is spelt wrongly.
- | | |
|----------------|------------|
| a) Conceit | b) Dungaon |
| c) Dismissible | d) Distil |

197. Choose the word which is spelt wrongly.
- | | |
|---------------|--------------|
| a) Beginer | b) Besiege |
| c) Perishable | d) Privilege |

198. Choose the word which is spelt wrongly.
- | | |
|----------------|-------------|
| a) Stigma | b) Recovery |
| c) Anticipiate | d) Crockery |
199. Choose the word which is spelt wrongly.
- | | |
|---------------|--------------|
| a) Beautisian | b) Bilingual |
| c) Barbarian | d) Ballon |
200. Choose the word which is spelt wrongly.
- | | |
|---------------|-------------|
| a) Gorgeous | b) Granduer |
| c) Gratuitous | d) Glutton |

Use For Rough Work

Use For Rough Work

Use For Rough Work

Set A

Set	Question N	Key
A	1	C
A	2	D
A	3	B
A	4	A
A	5	B
A	6	A
A	7	D
A	8	C
A	9	B
A	10	C
A	11	D
A	12	B
A	13	D
A	14	D
A	15	B
A	16	D
A	17	A
A	18	B
A	19	A
A	20	B
A	21	B
A	22	B
A	23	C
A	24	B
A	25	C
A	26	C
A	27	B
A	28	C
A	29	A
A	30	D
A	31	D
A	32	A
A	33	D
A	34	A
A	35	A
A	36	B
A	37	D
A	38	A
A	39	C
A	40	D
A	41	C
A	42	A
A	43	B
A	44	C
A	45	C
A	46	D

Set A

A	47	D
A	48	C
A	49	A
A	50	C
A	51	A
A	52	A
A	53	C
A	54	B
A	55	D
A	56	C
A	57	B
A	58	A
A	59	B
A	60	D
A	61	D
A	62	D
A	63	C
A	64	B
A	65	C
A	66	C
A	67	D
A	68	A
A	69	D
A	70	C
A	71	A
A	72	B
A	73	C
A	74	D
A	75	A
A	76	D
A	77	A
A	78	B
A	79	A
A	80	C
A	81	B
A	82	C
A	83	A
A	84	B
A	85	C
A	86	C
A	87	B
A	88	D
A	89	B
A	90	D
A	91	A
A	92	A
A	93	B

Set A

A	94	D
A	95	D
A	96	D
A	97	C
A	98	D
A	99	A
A	100	B
A	101	C
A	102	C
A	103	B
A	104	C
A	105	C
A	106	D
A	107	C
A	108	B
A	109	D
A	110	A
A	111	A
A	112	C
A	113	B
A	114	A
A	115	C
A	116	B
A	117	C
A	118	D
A	119	A
A	120	B
A	121	B
A	122	C
A	123	B
A	124	C
A	125	B
A	126	D
A	127	A
A	128	A
A	129	D
A	130	C
A	131	B
A	132	A
A	133	B
A	134	D
A	135	D
A	136	B
A	137	A
A	138	C
A	139	A
A	140	B

Set A

A	141	C
A	142	D
A	143	A
A	144	D
A	145	A
A	146	A
A	147	A
A	148	A
A	149	A
A	150	D
A	151	C
A	152	B
A	153	A
A	154	D
A	155	D
A	156	C
A	157	D
A	158	C
A	159	B
A	160	C
A	161	A
A	162	D
A	163	A
A	164	A
A	165	A
A	166	D
A	167	B
A	168	C
A	169	B
A	170	A
A	171	A
A	172	B
A	173	D
A	174	A
A	175	B
A	176	B
A	177	A
A	178	D
A	179	B
A	180	C
A	181	A
A	182	C
A	183	B
A	184	D
A	185	B
A	186	A
A	187	C

Set A

A	188	B
A	189	A
A	190	C
A	191	C
A	192	D
A	193	B
A	194	A
A	195	B
A	196	A
A	197	C
A	198	D
A	199	C
A	200	B

set B

Set	Question N	Key
B	1	B
B	2	B
B	3	C
B	4	B
B	5	C
B	6	C
B	7	B
B	8	C
B	9	A
B	10	D
B	11	D
B	12	A
B	13	D
B	14	A
B	15	A
B	16	B
B	17	D
B	18	A
B	19	C
B	20	D
B	21	C
B	22	A
B	23	B
B	24	C
B	25	C
B	26	D
B	27	D
B	28	C
B	29	A
B	30	C
B	31	C
B	32	D
B	33	B
B	34	A
B	35	B
B	36	A
B	37	D
B	38	C
B	39	B
B	40	C
B	41	D
B	42	B
B	43	D
B	44	D
B	45	B
B	46	D

Set B

B	47	A
B	48	B
B	49	A
B	50	B
B	51	D
B	52	D
B	53	C
B	54	B
B	55	C
B	56	C
B	57	D
B	58	A
B	59	D
B	60	C
B	61	A
B	62	B
B	63	C
B	64	D
B	65	A
B	66	D
B	67	A
B	68	B
B	69	A
B	70	C
B	71	B
B	72	C
B	73	A
B	74	B
B	75	C
B	76	C
B	77	B
B	78	D
B	79	B
B	80	D
B	81	A
B	82	A
B	83	B
B	84	D
B	85	D
B	86	D
B	87	C
B	88	D
B	89	A
B	90	B
B	91	A
B	92	A
B	93	C

Set B

B	94	B
B	95	D
B	96	C
B	97	B
B	98	A
B	99	B
B	100	D
B	101	B
B	102	C
B	103	B
B	104	C
B	105	B
B	106	D
B	107	A
B	108	A
B	109	D
B	110	C
B	111	B
B	112	A
B	113	B
B	114	D
B	115	D
B	116	B
B	117	A
B	118	C
B	119	A
B	120	B
B	121	C
B	122	D
B	123	A
B	124	D
B	125	A
B	126	A
B	127	A
B	128	A
B	129	A
B	130	D
B	131	C
B	132	B
B	133	A
B	134	D
B	135	D
B	136	C
B	137	D
B	138	C
B	139	B
B	140	C

Set B

B	141	A
B	142	D
B	143	A
B	144	A
B	145	A
B	146	D
B	147	B
B	148	C
B	149	B
B	150	A
B	151	A
B	152	B
B	153	D
B	154	A
B	155	B
B	156	B
B	157	A
B	158	D
B	159	B
B	160	C
B	161	A
B	162	C
B	163	B
B	164	D
B	165	B
B	166	A
B	167	C
B	168	B
B	169	A
B	170	C
B	171	C
B	172	D
B	173	B
B	174	A
B	175	B
B	176	A
B	177	C
B	178	D
B	179	C
B	180	B
B	181	C
B	182	C
B	183	B
B	184	C
B	185	C
B	186	D
B	187	C

Set B

B	188	B
B	189	D
B	190	A
B	191	A
B	192	C
B	193	B
B	194	A
B	195	C
B	196	B
B	197	C
B	198	D
B	199	A
B	200	B

SET-C

Set	Question	N	Key
C	1	D	
C	2	A	
C	3	D	
C	4	A	
C	5	A	
C	6	B	
C	7	D	
C	8	A	
C	9	C	
C	10	D	
C	11	C	
C	12	A	
C	13	B	
C	14	C	
C	15	C	
C	16	D	
C	17	D	
C	18	C	
C	19	A	
C	20	C	
C	21	C	
C	22	D	
C	23	B	
C	24	A	
C	25	B	
C	26	A	
C	27	D	
C	28	C	
C	29	B	
C	30	C	
C	31	D	
C	32	B	
C	33	D	
C	34	D	
C	35	B	
C	36	D	
C	37	A	
C	38	B	
C	39	A	
C	40	B	
C	41	B	
C	42	B	
C	43	C	
C	44	B	
C	45	C	
C	46	C	

SET-C

C	47	B
C	48	C
C	49	A
C	50	D
C	51	A
C	52	B
C	53	C
C	54	D
C	55	A
C	56	D
C	57	A
C	58	B
C	59	A
C	60	C
C	61	B
C	62	C
C	63	A
C	64	B
C	65	C
C	66	C
C	67	B
C	68	D
C	69	B
C	70	D
C	71	A
C	72	A
C	73	B
C	74	D
C	75	D
C	76	D
C	77	C
C	78	D
C	79	A
C	80	B
C	81	A
C	82	A
C	83	C
C	84	B
C	85	D
C	86	C
C	87	B
C	88	A
C	89	B
C	90	D
C	91	D
C	92	D
C	93	C

SET-C

C	94	B
C	95	C
C	96	C
C	97	D
C	98	A
C	99	D
C	100	C
C	101	B
C	102	A
C	103	B
C	104	D
C	105	D
C	106	B
C	107	A
C	108	C
C	109	A
C	110	B
C	111	C
C	112	D
C	113	A
C	114	D
C	115	A
C	116	A
C	117	A
C	118	A
C	119	A
C	120	D
C	121	C
C	122	B
C	123	A
C	124	D
C	125	D
C	126	C
C	127	D
C	128	C
C	129	B
C	130	C
C	131	A
C	132	D
C	133	A
C	134	A
C	135	A
C	136	D
C	137	B
C	138	C
C	139	B
C	140	A

SET-C

C	141	A
C	142	B
C	143	D
C	144	A
C	145	B
C	146	B
C	147	A
C	148	D
C	149	B
C	150	C
C	151	A
C	152	C
C	153	B
C	154	D
C	155	B
C	156	A
C	157	C
C	158	B
C	159	A
C	160	C
C	161	C
C	162	D
C	163	B
C	164	A
C	165	B
C	166	A
C	167	C
C	168	D
C	169	C
C	170	B
C	171	C
C	172	C
C	173	B
C	174	C
C	175	C
C	176	D
C	177	C
C	178	B
C	179	D
C	180	A
C	181	A
C	182	C
C	183	B
C	184	A
C	185	C
C	186	B
C	187	C

SET-C

C	188	D ✓
C	189	A ✓
C	190	B ✓
C	191	B ✓
C	192	C ✓
C	193	B ✓
C	194	C ✓
C	195	B ✓
C	196	D ✓
C	197	A ✓
C	198	A ✓
C	199	D ✓
C	200	C ✓

Set D

Set	Question	N	Key
D	1		C
D	2		A
D	3		B
D	4		C
D	5		C
D	6		D
D	7		D
D	8		C
D	9		A
D	10		C
D	11		C
D	12		D
D	13		B
D	14		A
D	15		B
D	16		A
D	17		D
D	18		C
D	19		B
D	20		C
D	21		D
D	22		B
D	23		D
D	24		D
D	25		B
D	26		D
D	27		A
D	28		B
D	29		A
D	30		B
D	31		B
D	32		B
D	33		C
D	34		B
D	35		C
D	36		C
D	37		B
D	38		C
D	39		A
D	40		D
D	41		D
D	42		A
D	43		D
D	44		A
D	45		A
D	46		B

Set D

D	47	D
D	48	A
D	49	C
D	50	D
D	51	B
D	52	C
D	53	A
D	54	B
D	55	C
D	56	C
D	57	B
D	58	D
D	59	B
D	60	D
D	61	A
D	62	A
D	63	B
D	64	D
D	65	D
D	66	D
D	67	C
D	68	D
D	69	A
D	70	B
D	71	A
D	72	A
D	73	C
D	74	B
D	75	D
D	76	C
D	77	B
D	78	A
D	79	B
D	80	D
D	81	D
D	82	D
D	83	C
D	84	B
D	85	C
D	86	C
D	87	D
D	88	A
D	89	D
D	90	C
D	91	A
D	92	B
D	93	C

Set D

D	94	D
D	95	A
D	96	D
D	97	A
D	98	B
D	99	A
D	100	C
D	101	C
D	102	D
D	103	A
D	104	D
D	105	A
D	106	A
D	107	A
D	108	A
D	109	A
D	110	D
D	111	C
D	112	B
D	113	A
D	114	D
D	115	D
D	116	C
D	117	D
D	118	C
D	119	B
D	120	C
D	121	A
D	122	D
D	123	A
D	124	A
D	125	A
D	126	D
D	127	B
D	128	C
D	129	B
D	130	A
D	131	A
D	132	B
D	133	D
D	134	A
D	135	B
D	136	B
D	137	A
D	138	D
D	139	B
D	140	C

Set D

D	141	A
D	142	C
D	143	B
D	144	D
D	145	B
D	146	A
D	147	C
D	148	B
D	149	A
D	150	C
D	151	C
D	152	D
D	153	B
D	154	A
D	155	B
D	156	A
D	157	C
D	158	D
D	159	C
D	160	B
D	161	C
D	162	C
D	163	B
D	164	C
D	165	C
D	166	D
D	167	C
D	168	B
D	169	D
D	170	A
D	171	A
D	172	C
D	173	B
D	174	A
D	175	C
D	176	B
D	177	C
D	178	D
D	179	A
D	180	B
D	181	B
D	182	C
D	183	B
D	184	C
D	185	B
D	186	D
D	187	A

Set D

D	188	A
D	189	D
D	190	C
D	191	B
D	192	A
D	193	B
D	194	D
D	195	D
D	196	B
D	197	A
D	198	C
D	199	A
D	200	B